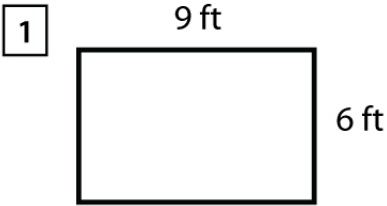


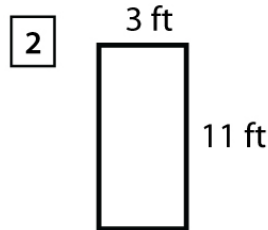
Name : _____

Score : _____ Date : _____

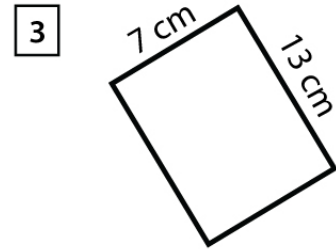
Area and Perimeter of Rectangles



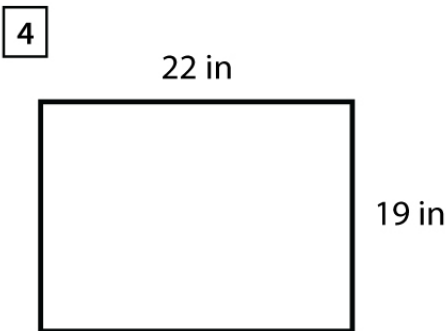
Area = _____
Perimeter = _____



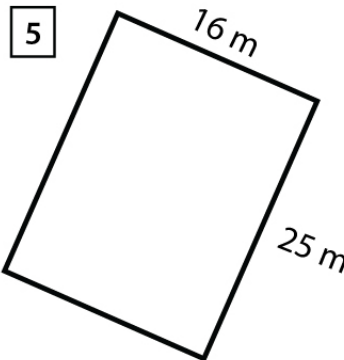
Area = _____
Perimeter = _____



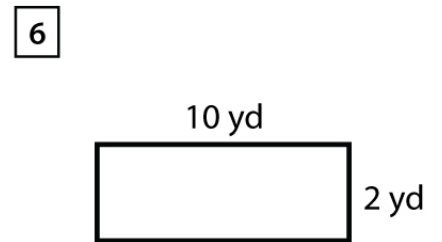
Area = _____
Perimeter = _____



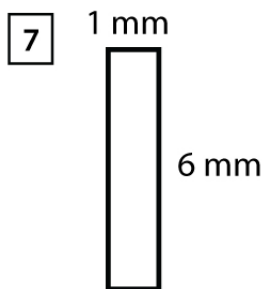
Area = _____
Perimeter = _____



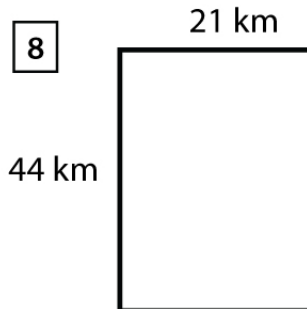
Area = _____
Perimeter = _____



Area = _____
Perimeter = _____



Area = _____
Perimeter = _____



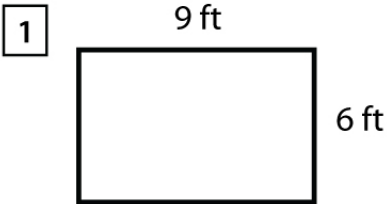
Area = _____
Perimeter = _____

Name : _____

Score : _____ Date : _____

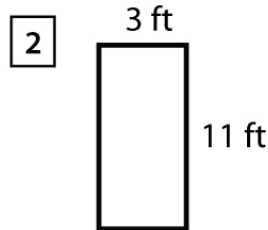
Area and Perimeter of Rectangles

Answers



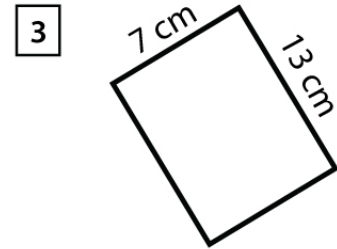
Area = 54 ft²

Perimeter = 30 ft



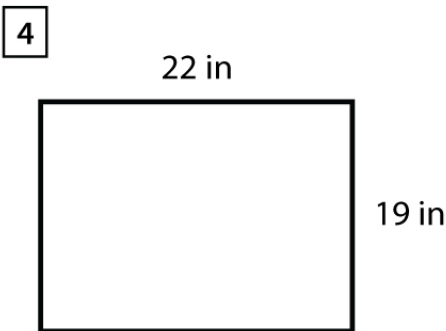
Area = 33 ft²

Perimeter = 28 ft



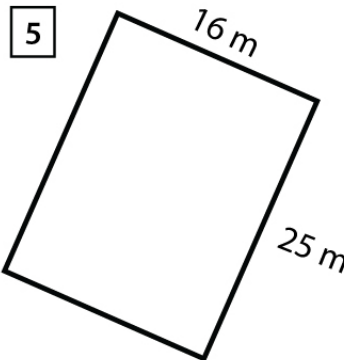
Area = 91 cm²

Perimeter = 40 cm



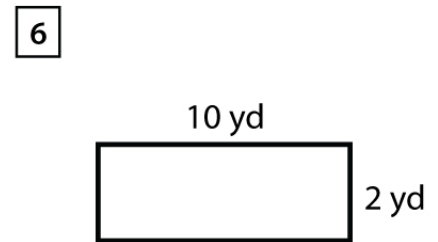
Area = 418 in²

Perimeter = 82 in



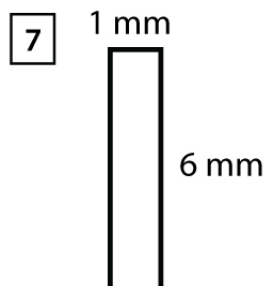
Area = 400 m²

Perimeter = 82 m



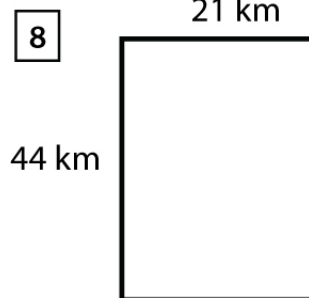
Area = 20 yd²

Perimeter = 24 yd



Area = 6 mm²

Perimeter = 14 mm



Area = 924 km²

Perimeter = 130 km