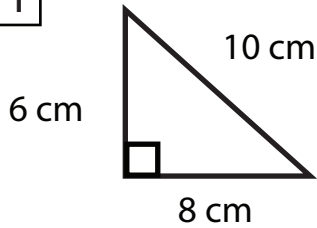


Name : _____

Score : _____ Date : _____

Area And Perimeter Of Rectangles And Triangles

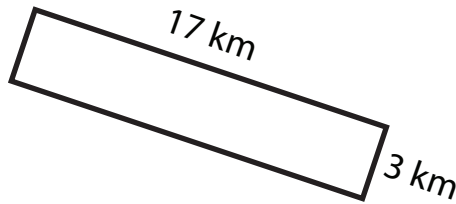
1



Area = _____

Perimeter = _____

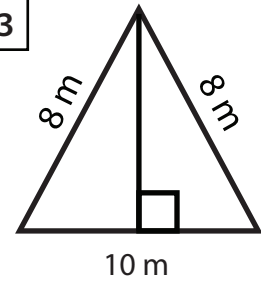
2



Area = _____

Perimeter = _____

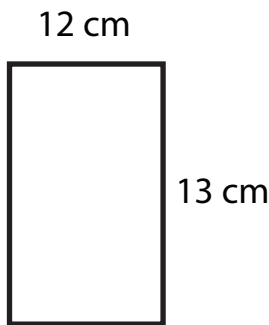
3



Area = _____

Perimeter = _____

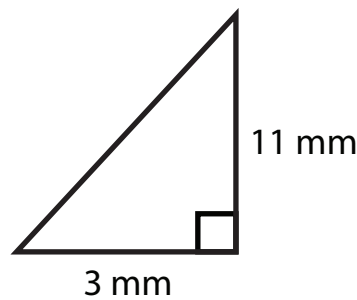
4



Area = _____

Perimeter = _____

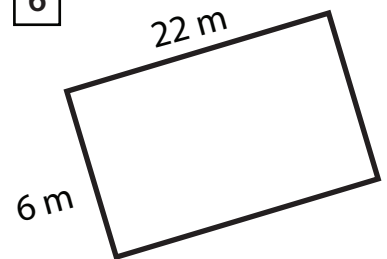
5



Area = _____

Perimeter = _____

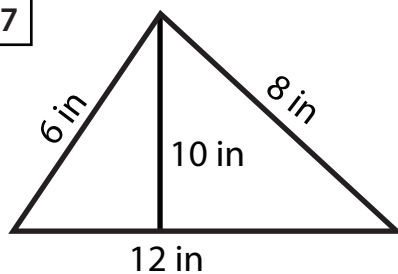
6



Area = _____

Perimeter = _____

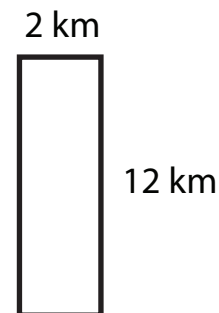
7



Area = _____

Perimeter = _____

8



Area = _____

Perimeter = _____