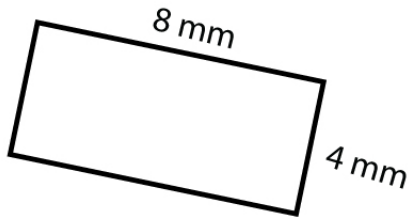


Name : _____

Score : _____ Date : _____

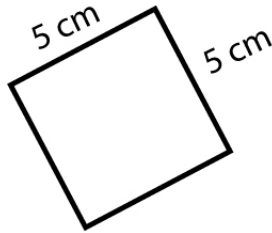
Area and Perimeter of Squares and Rectangles

1




Area = _____
Perimeter = _____

2



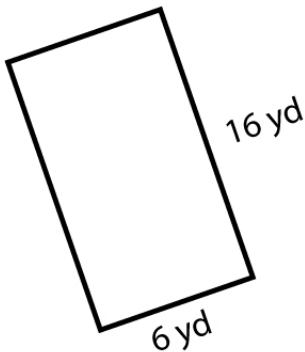
Area = _____
Perimeter = _____

3



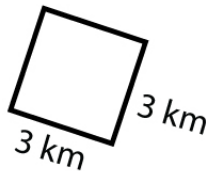
Area = _____
Perimeter = _____

4



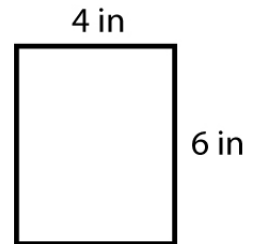
Area = _____
Perimeter = _____

5



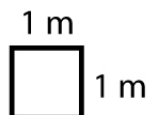
Area = _____
Perimeter = _____

6



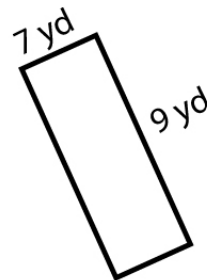
Area = _____
Perimeter = _____

7



Area = _____
Perimeter = _____

8



Area = _____
Perimeter = _____

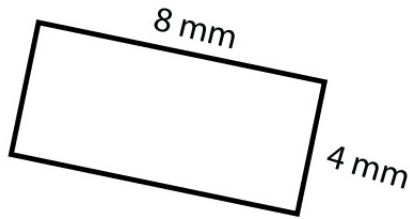
Name : _____

Score : _____ Date : _____

Area and Perimeter of Squares and Rectangles

Answers

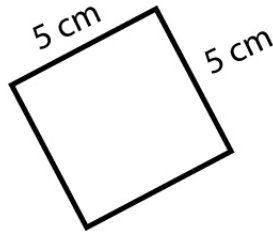
1



Area = 32 mm²

Perimeter = 24 mm


2



Area = 25 cm²

Perimeter = 20 cm

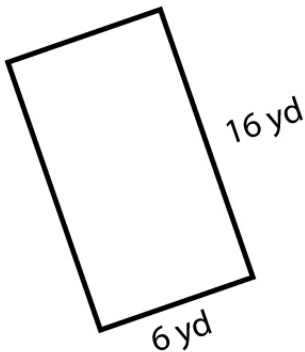
3



Area = 16 in²

Perimeter = 20 in

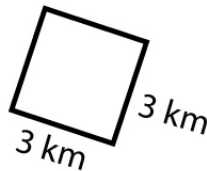
4



Area = 96 yd²

Perimeter = 44 yd

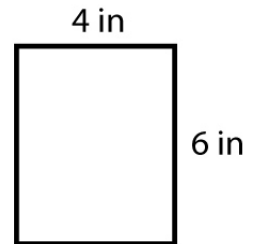
5



Area = 9 km²

Perimeter = 12 km

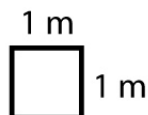
6



Area = 24 in²

Perimeter = 20 in

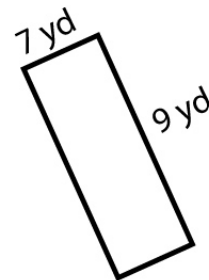
7



Area = 1 m²

Perimeter = 4 m

8



Area = 63 yd²

Perimeter = 32 yd