

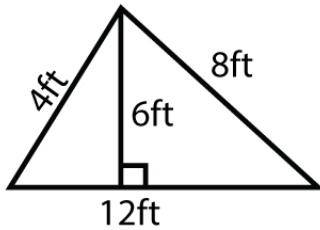
Name : _____

Score : _____ Date : _____

Area and Perimeter of Triangles Worksheet

Find the area and perimeter of each given triangle

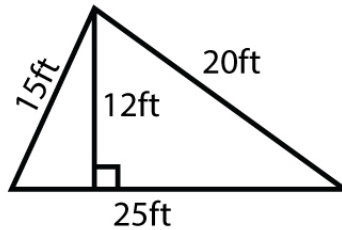
1



Area = _____

Perimeter = _____

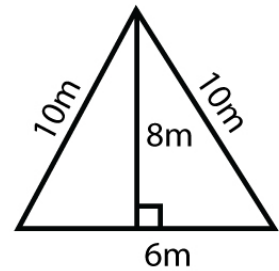
2



Area = _____

Perimeter = _____

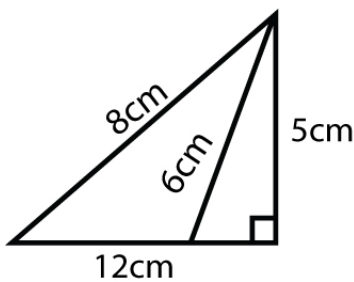
3



Area = _____

Perimeter = _____

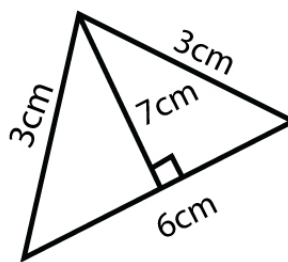
4



Area = _____

Perimeter = _____

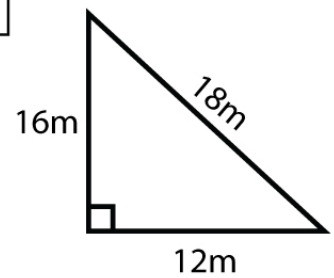
5



Area = _____

Perimeter = _____

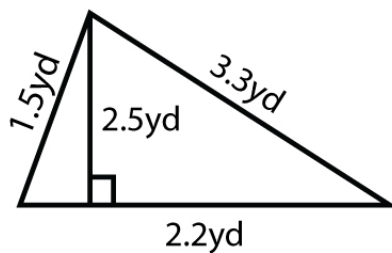
6



Area = _____

Perimeter = _____

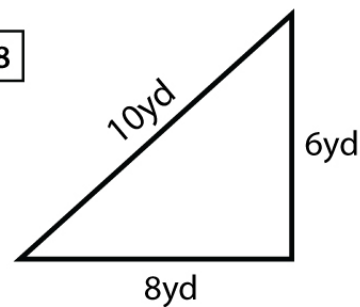
7



Area = _____

Perimeter = _____

8



Area = _____

Perimeter = _____

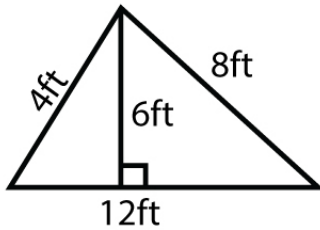
Name : _____

Score : _____ Date : _____

Area and Perimeter of Triangles Worksheet

Answers

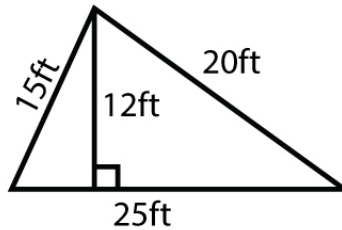
1



Area = 36ft^2

Perimeter = 24ft

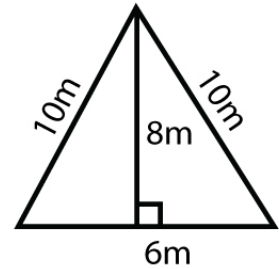
2



Area = 150ft^2

Perimeter = 60ft

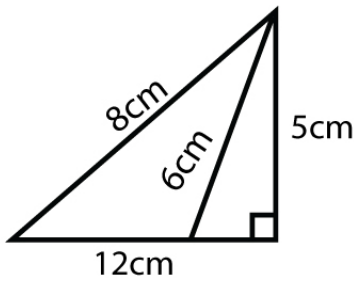
3



Area = 24m^2

Perimeter = 26m

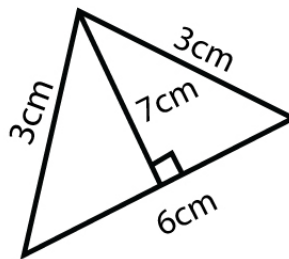
4



Area = 30cm^2

Perimeter = 25cm

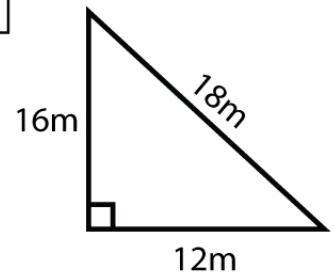
5



Area = 21cm^2

Perimeter = 12cm

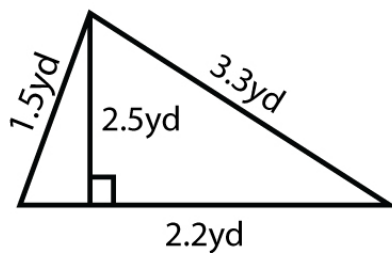
6



Area = 96m^2

Perimeter = 46m

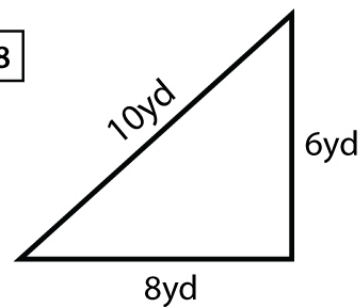
7



Area = 2.75yd^2

Perimeter = 7yd

8



Area = 24yd^2

Perimeter = 24yd