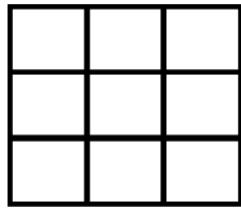


Name : _____

Score : _____ Date : _____

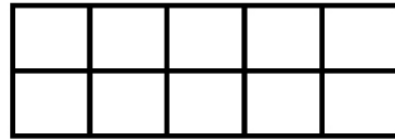
Area of a Rectangle

Solved Example :



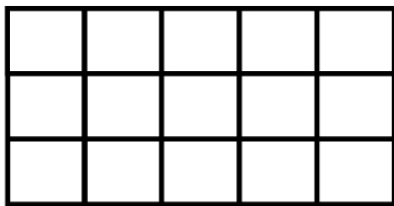
Area = 9 square units

1



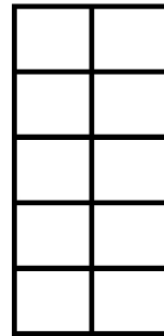
Area = _____ square units

2




Area = _____ square units

3



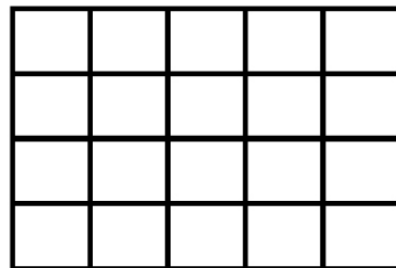
Area = _____ square units

4



Area = _____ square units

5



Area = _____ square units

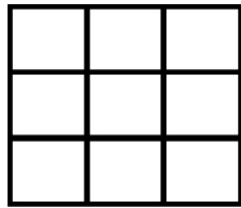
Name : _____

Score : _____ Date : _____

Area of a Rectangle

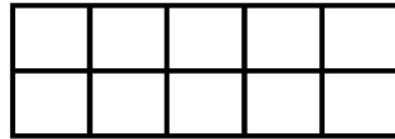
Solved Example :

Answers



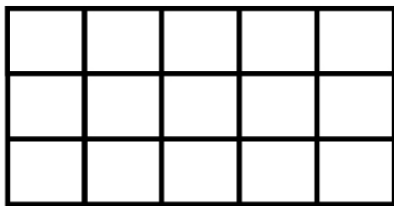
Area = 9 square units

1



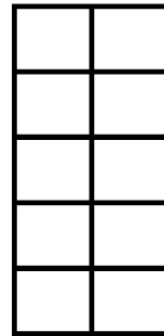
Area = 10 square units

2




Area = 15 square units

3



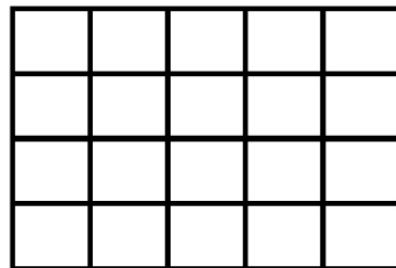
Area = 10 square units

4



Area = 36 square units

5



Area = 20 square units