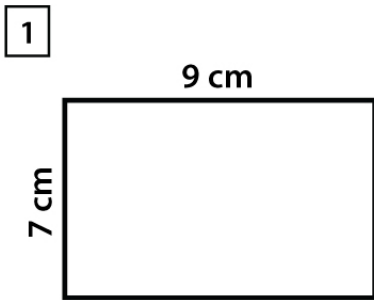


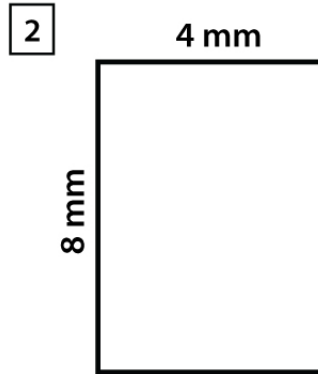
Name : \_\_\_\_\_

Score : \_\_\_\_\_ Date : \_\_\_\_\_

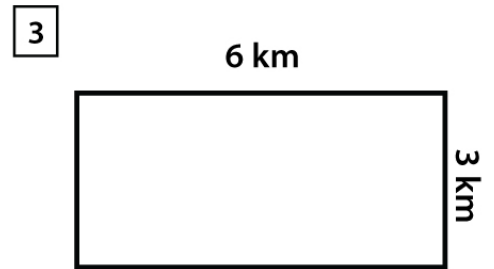
Area of a Rectangle



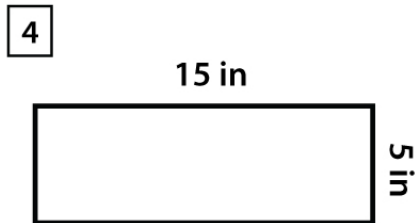
Area = \_\_\_\_\_



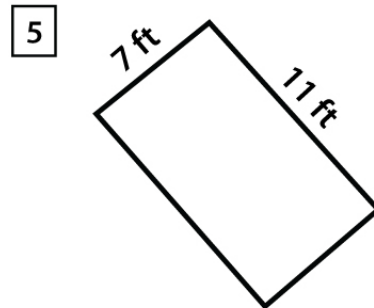
Area = \_\_\_\_\_



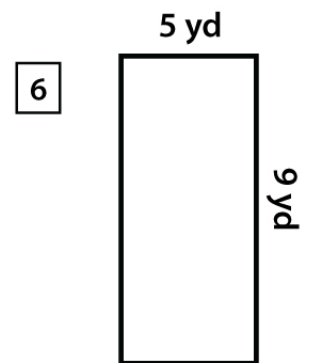
Area = \_\_\_\_\_



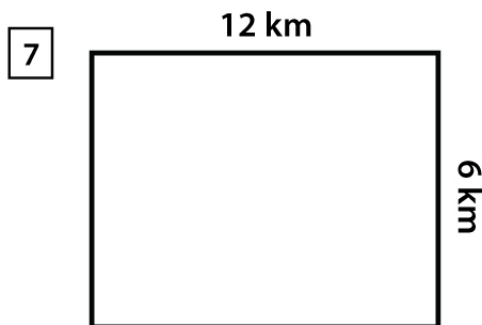
Area = \_\_\_\_\_



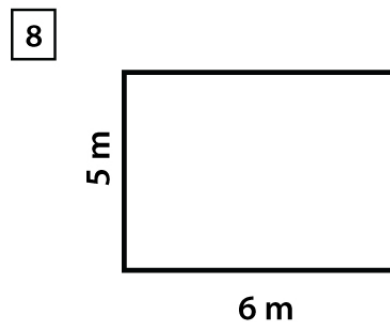
Area = \_\_\_\_\_



Area = \_\_\_\_\_



Area = \_\_\_\_\_



Area = \_\_\_\_\_

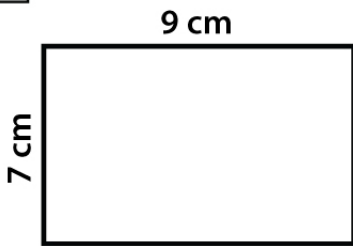
Name : \_\_\_\_\_

Score : \_\_\_\_\_ Date : \_\_\_\_\_

Area of a Rectangle

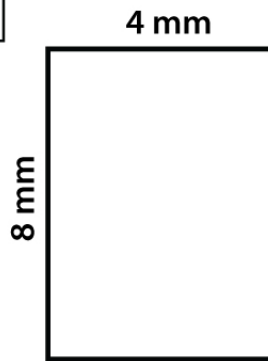
Answers

1




Area = 63 cm<sup>2</sup>

2




Area = 32 mm<sup>2</sup>

3



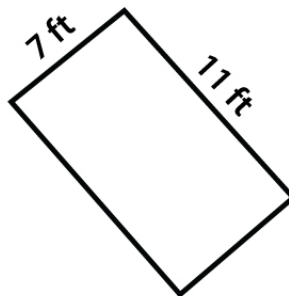
Area = 18 km<sup>2</sup>

4



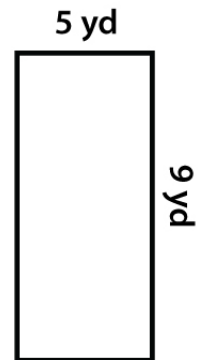
Area = 75 in<sup>2</sup>

5



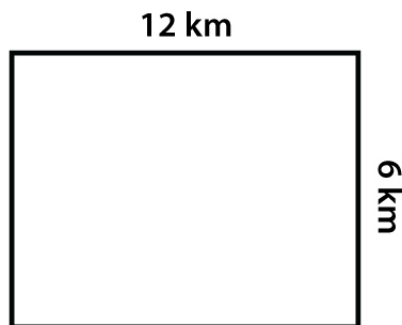
Area = 77 ft<sup>2</sup>

6



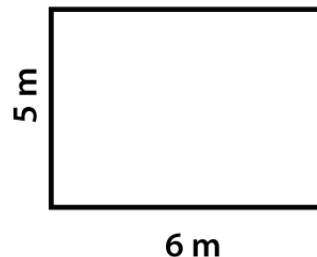
Area = 45 yd<sup>2</sup>

7



Area = 72 km<sup>2</sup>

8



Area = 30 m<sup>2</sup>