

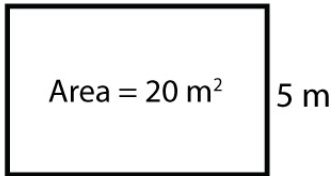
Name : _____

Score : _____ Date : _____

Finding Missing Lengths of Rectangles

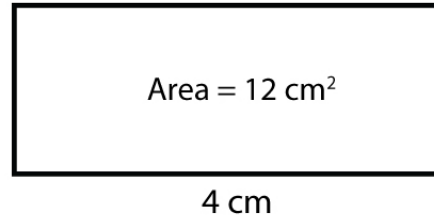
Calculate the missing lengths in each rectangles

1



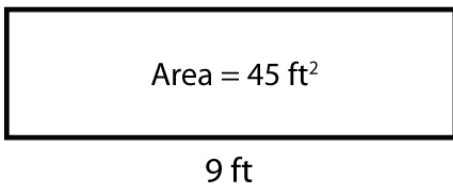
Width = _____

2



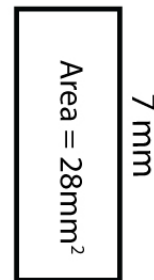
Length = _____

3



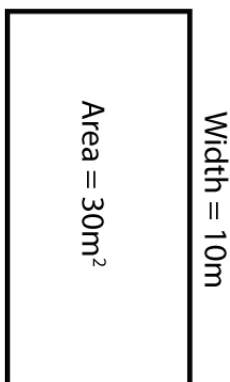
Length = _____

4



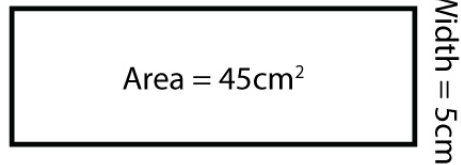
Width = _____

5



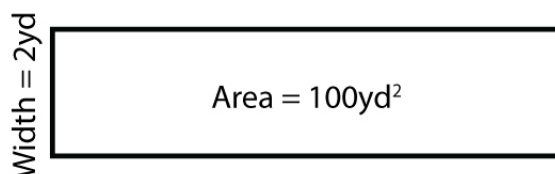
Length = _____

6



Length = _____

7



Length = _____

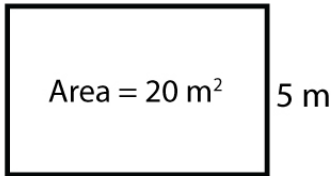
Name : _____

Score : _____ Date : _____

Finding Missing Lengths of Rectangles

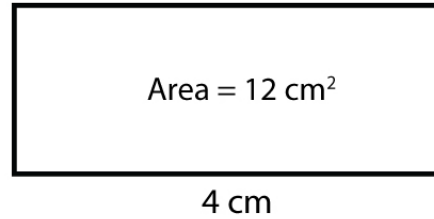
Answers

1



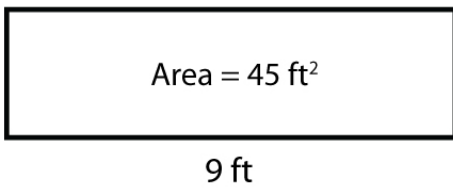
Width = 4 m

2



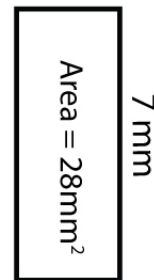
Length = 3 cm

3



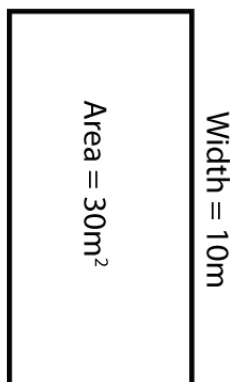
Length = 5 ft

4



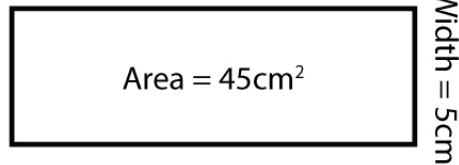
Width = 4 mm

5



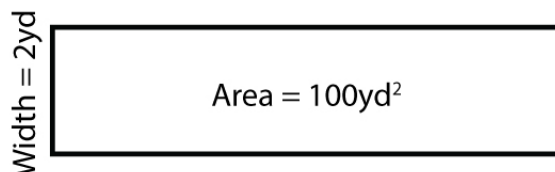
Length = 3 m

6



Length = 9 cm

7



Length = 50 yd