

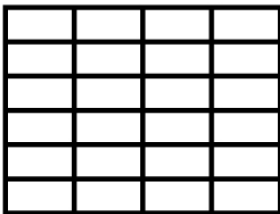
Name : _____

Score : _____ Date : _____

Partitioning Rectangles

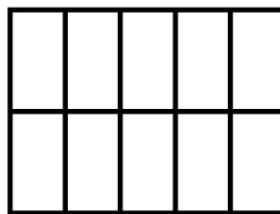
Direction: Divide the given rectangles into partitions as instructed and then count the number of boxes.

1 6 rows 4 columns




_____ boxes

2 2 rows 5 columns



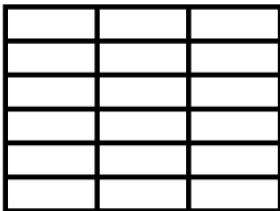
_____ boxes

3 5 rows 5 columns




_____ boxes

4 6 rows 3 columns



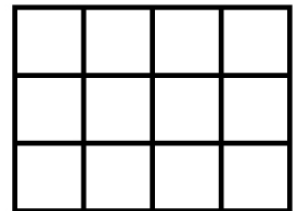
_____ boxes

5 4 rows 5 columns




_____ boxes

6 3 rows 4 columns



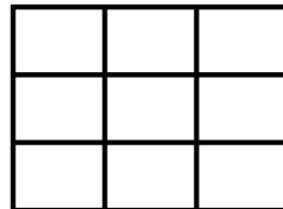
_____ boxes

7 5 rows 4 columns



_____ boxes

8 3 rows 3 columns



_____ boxes

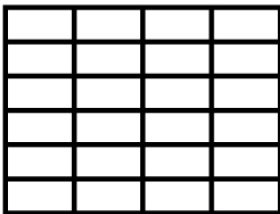
Name : _____

Score : _____ Date : _____

Partitioning Rectangles

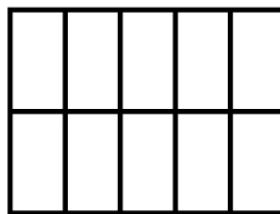
Answers

1 6 rows 4 columns




24 boxes

2 2 rows 5 columns



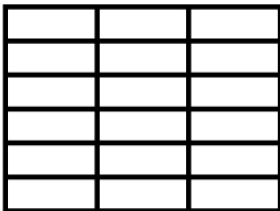
10 boxes

3 5 rows 5 columns




25 boxes

4 6 rows 3 columns



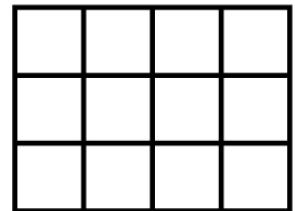
18 boxes

5 4 rows 5 columns




20 boxes

6 3 rows 4 columns



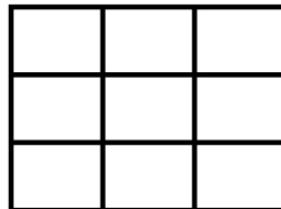
12 boxes

7 5 rows 4 columns



20 boxes

8 3 rows 3 columns



9 boxes