

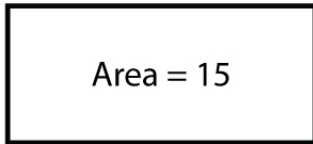
Name : _____

Score : _____ Date : _____

Rectangle Practice Worksheet

Find the length or width of each rectangle

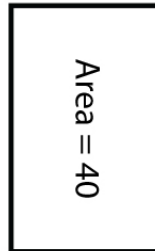
1



Length = 5

Width = _____

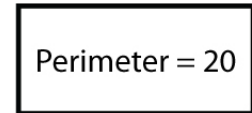
2



Width = 4

Length = _____

3



Width = 6

Length = _____

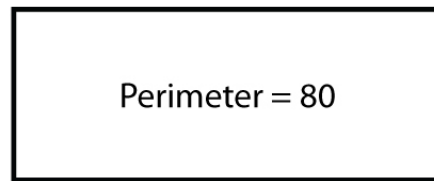
4



Length = 20

Width = _____

5

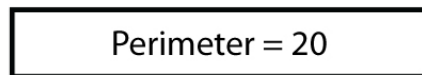


Length = 25

Width = _____

Find the area and perimeter of each rectangle

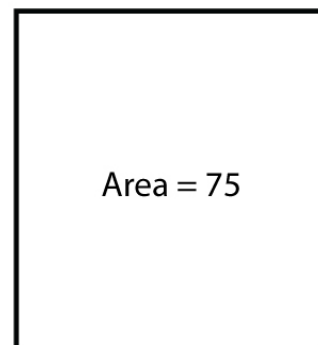
6



Width = 2

Area = _____

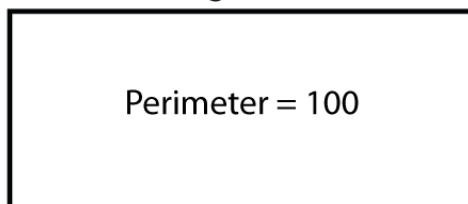
7



Width = 10

Perimeter = _____

8



Length = 30

Area = _____

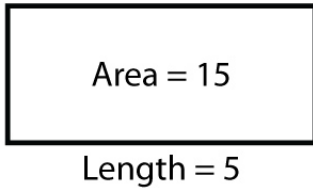
Name : _____

Score : _____ Date : _____

Rectangle Practice Worksheet

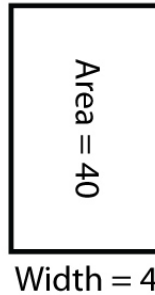
Answers

1



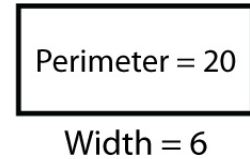
Width = 3 units

2



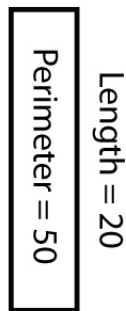
Length = 10 units

3



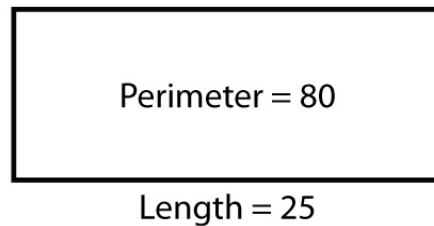
Length = 3.33 units

4



Width = 5 units

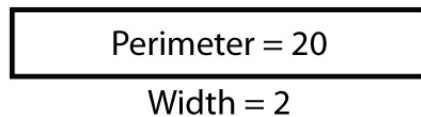
5



Width = 15 units

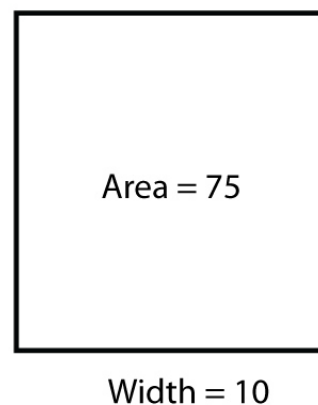
Find the area and perimeter of each rectangle

6



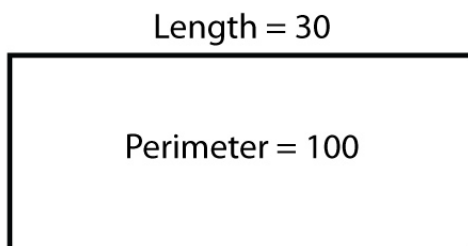
Area = 16 square units

7



Perimeter = 35 units

8



Area = 600 square units