

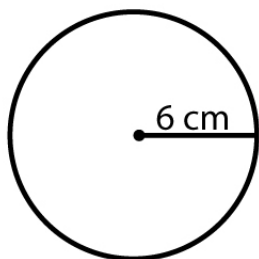
Name : _____

Score : _____ Date : _____

Radius and Diameter of a Circle

Find the radius and diameter of each circle

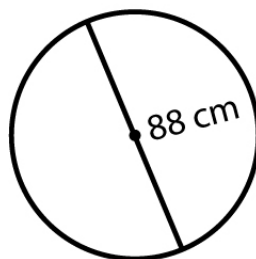
1



Radius = _____

Diameter = _____

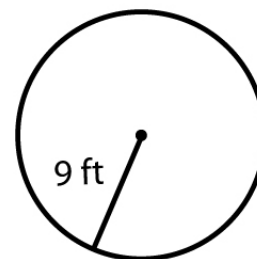
2



Radius = _____

Diameter = _____


3



Radius = _____

Diameter = _____

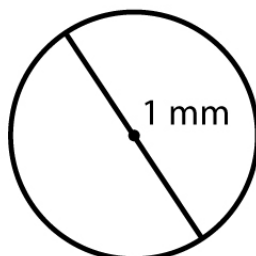
4



Radius = _____

Diameter = _____

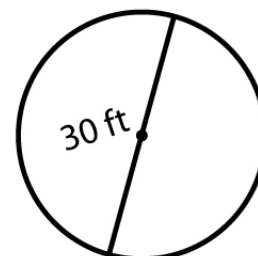
5



Radius = _____

Diameter = _____

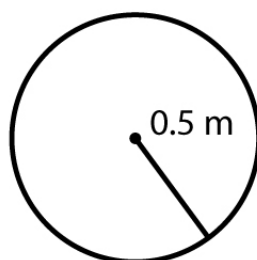
6



Radius = _____

Diameter = _____

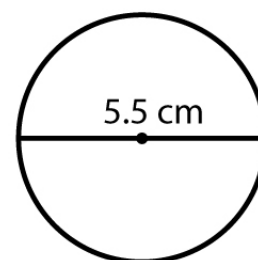
7



Radius = _____

Diameter = _____

8



Radius = _____

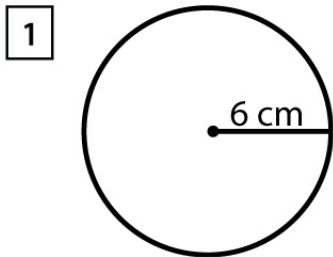
Diameter = _____

Name : _____

Score : _____ Date : _____

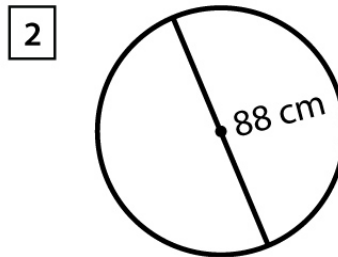
Radius and Diameter of a Circle

Answers



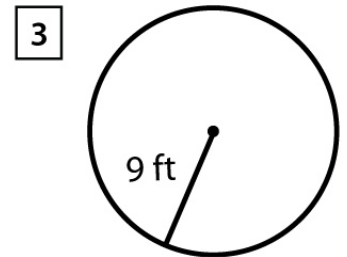
Radius = 6 cm

Diameter = 12 cm



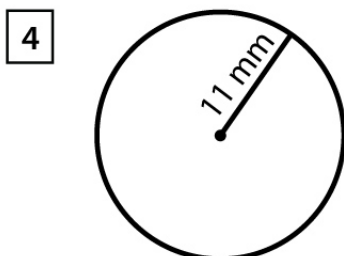
Radius = 44 cm

Diameter = 88 cm



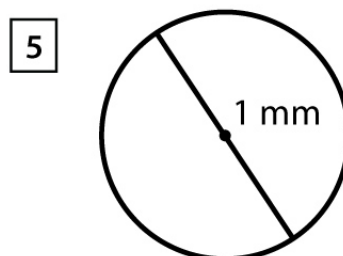
Radius = 9 ft

Diameter = 18 ft



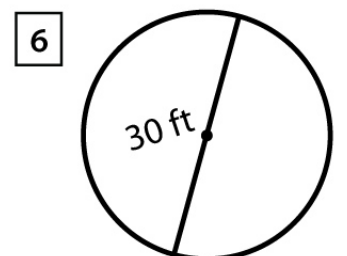
Radius = 11 mm

Diameter = 22 mm



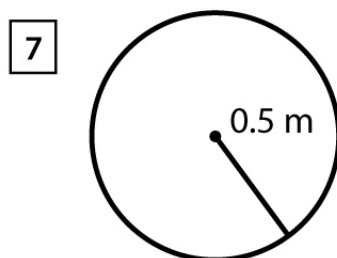
Radius = 0.5 mm

Diameter = 1 mm



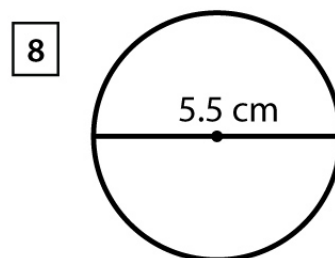
Radius = 15 ft

Diameter = 30 ft



Radius = 0.5 m

Diameter = 1 m



Radius = 2.75 cm

Diameter = 5.5 cm