

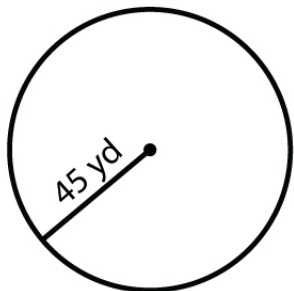
Name : \_\_\_\_\_

Score : \_\_\_\_\_ Date : \_\_\_\_\_

**Area and Circumference of a Circle**

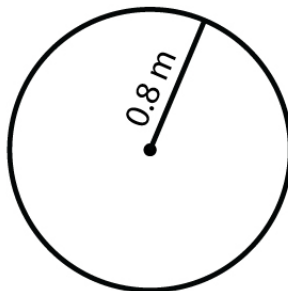
Find the area and circumference of each circle. Use  $\pi = 3.14$

1



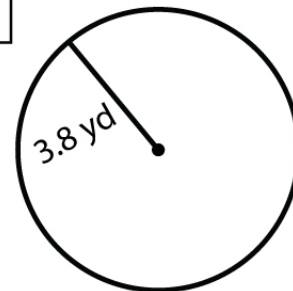
\_\_\_\_\_  
\_\_\_\_\_

2



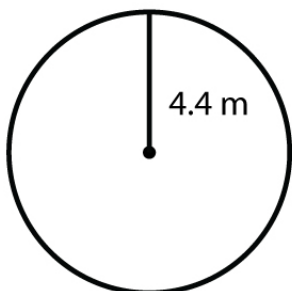
\_\_\_\_\_  
\_\_\_\_\_

3



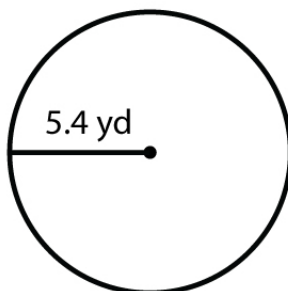
\_\_\_\_\_  
\_\_\_\_\_

4



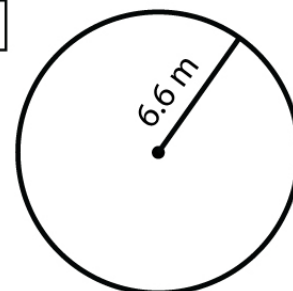
\_\_\_\_\_  
\_\_\_\_\_

5



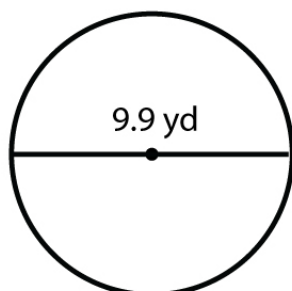
\_\_\_\_\_  
\_\_\_\_\_

6



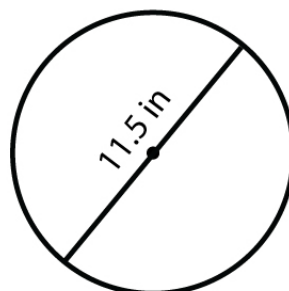
\_\_\_\_\_  
\_\_\_\_\_

7



\_\_\_\_\_  
\_\_\_\_\_

8



\_\_\_\_\_  
\_\_\_\_\_

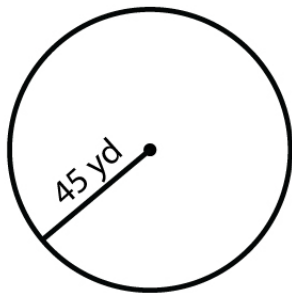
Name : \_\_\_\_\_

Score : \_\_\_\_\_ Date : \_\_\_\_\_

Area and Circumference of a Circle

Answers

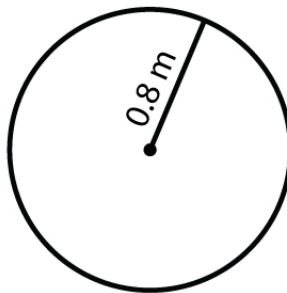
1



6361.72 yd<sup>2</sup>

282.74 yd

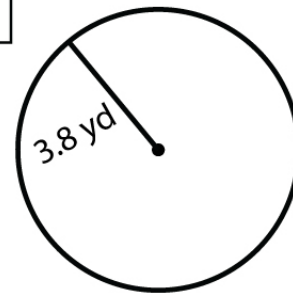
2



2.01 m<sup>2</sup>

5.02 m

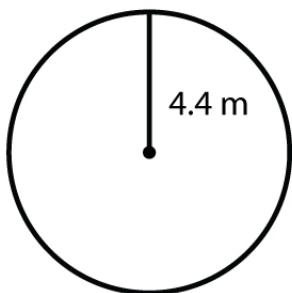
3



45.36 yd<sup>2</sup>

23.87 yd

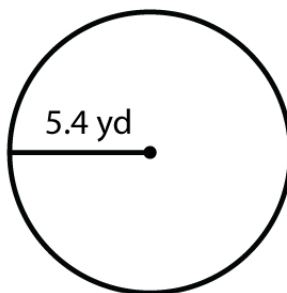
4



60.82 m<sup>2</sup>

27.64 m

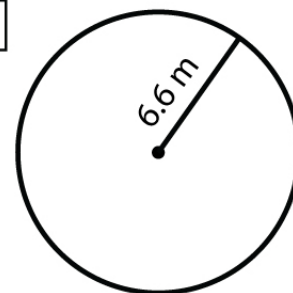
5



91.60 yd<sup>2</sup>

33.92 yd

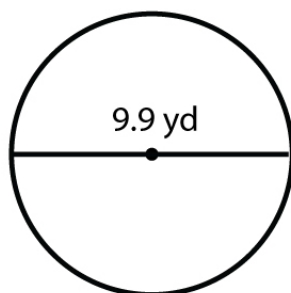
6



136.84 m<sup>2</sup>

41.46 m

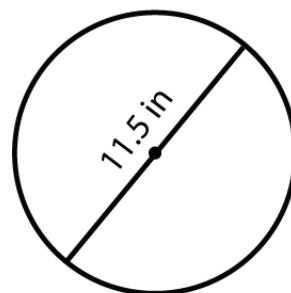
7



76.97 yd<sup>2</sup>

31.10 yd

8



103.86 in<sup>2</sup>

36.12 in