

Name : _____

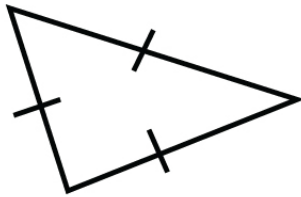
Score : _____ Date : _____

Naming Triangles Worksheet

Choose the name for each of the following triangles from the options given below

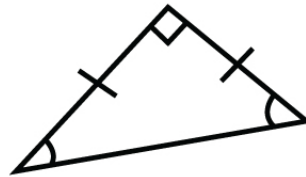
Based on sides

1



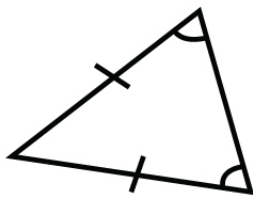
- a) scalene
- b) equilateral
- c) isosceles

2



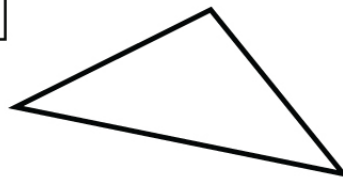
- a) isosceles
- b) equilateral
- c) scalene

3



- a) isosceles
- b) equilateral
- c) scalene

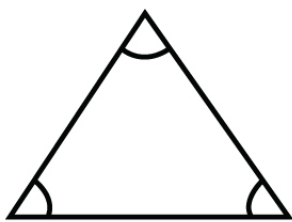
4



- a) isosceles
- b) equilateral
- c) scalene

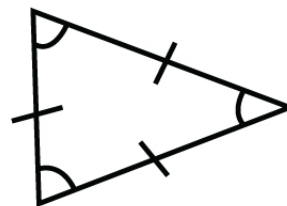
Based on angles

5



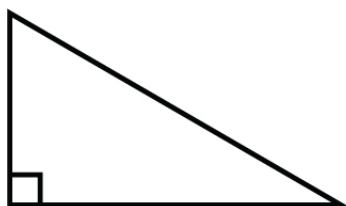
- a) acute
- b) obtuse
- c) right
- d) equiangular

6



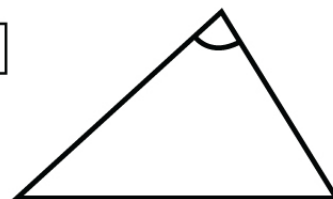
- a) scalene
- b) obtuse
- c) right
- d) equiangular

7



- a) obtuse
- b) acute
- c) equiangular
- d) right

8



- a) right
- b) acute
- c) obtuse
- d) equiangular

Name : _____

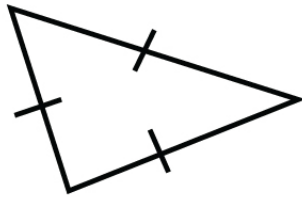
Score : _____ Date : _____

Naming Triangles Worksheet

Answers

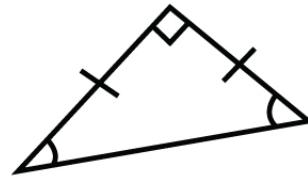
Based on sides

1



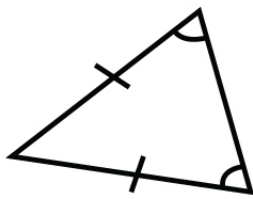
- a) scalene b) **equilateral**
c) isosceles

2



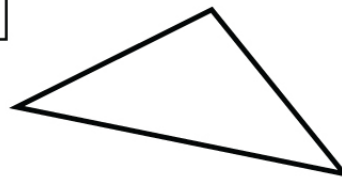
- a) **isosceles** b) equilateral
c) scalene

3



- a) **isosceles** b) equilateral
c) scalene

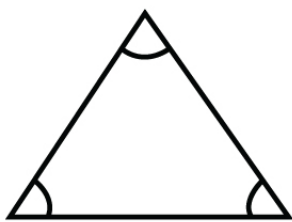
4



- a) isosceles b) equilateral
c) **scalene**

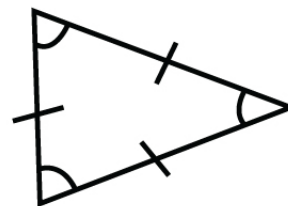
Based on angles

5



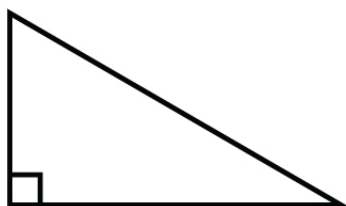
- a) **acute** b) obtuse
c) right d) equiangular

6



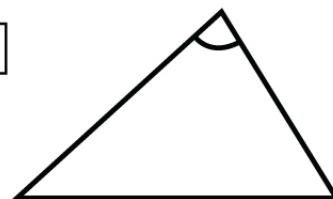
- a) scalene b) obtuse
c) right d) **equiangular**

7



- a) obtuse b) acute
c) equiangular d) **right**

8



- a) right b) acute
c) **obtuse** d) equiangular