

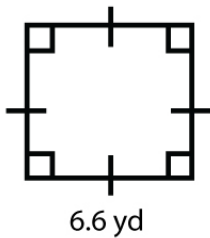
Name : _____

Score : _____ Date : _____

Area and Perimeter of Quadrilateral Worksheet

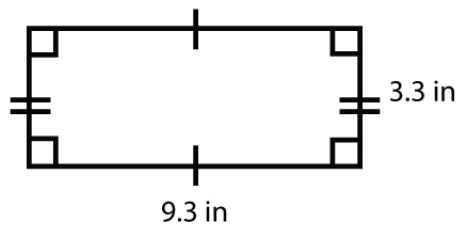
Find the area and perimeter of the given quadrilaterals

1



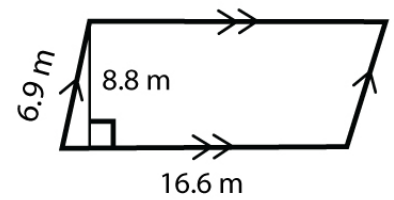
Area = _____
Perimeter = _____

2



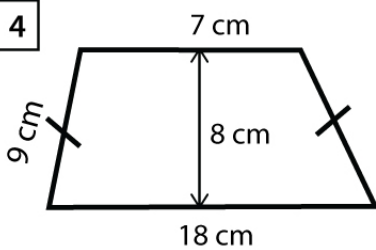
Area = _____
Perimeter = _____

3



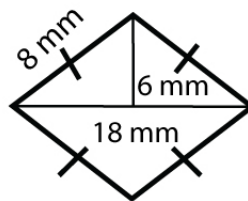
Area = _____
Perimeter = _____

4



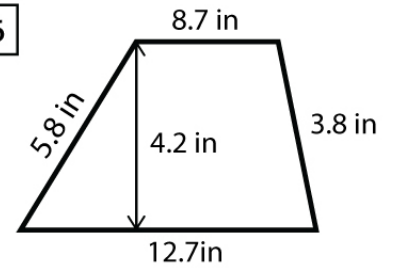
Area = _____
Perimeter = _____

5



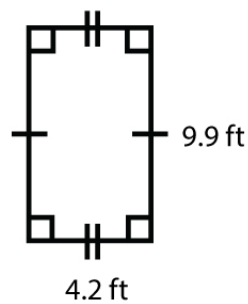
Area = _____
Perimeter = _____

6



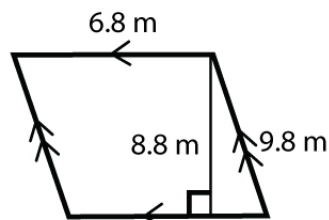
Area = _____
Perimeter = _____

7



Area = _____
Perimeter = _____

8



Area = _____
Perimeter = _____

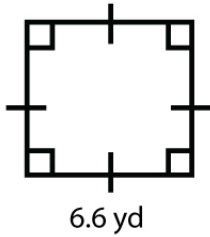
Name : _____

Score : _____ Date : _____

Area and Perimeter of Quadrilateral Worksheet

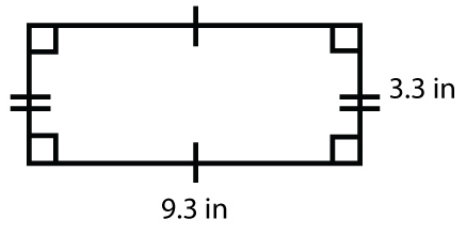
Answers

1



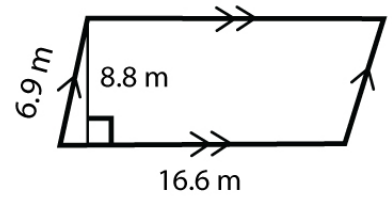
Area = 43.56 yd²
Perimeter = 26.4 yd

2



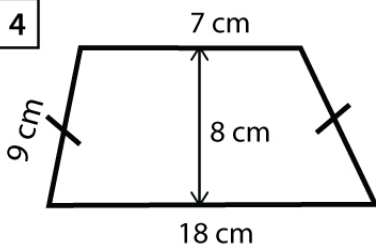
Area = 30.69 in²
Perimeter = 25.2 in

3



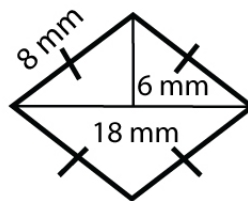
Area = 146.08 m²
Perimeter = 47 m

4



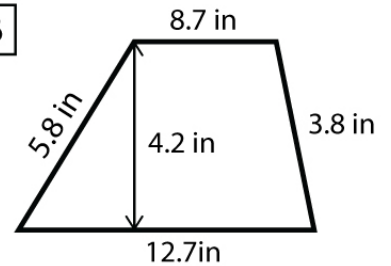
Area = 100 cm²
Perimeter = 43 cm

5



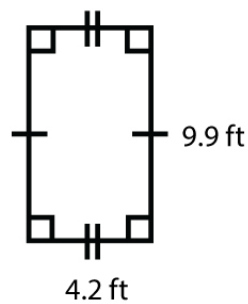
Area = 108 mm²
Perimeter = 32 mm

6



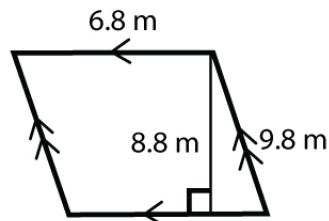
Area = 44.94 in²
Perimeter = 31 in

7



Area = 41.58 ft²
Perimeter = 28.2 ft

8



Area = 59.84 m²
Perimeter = 33.2 m