

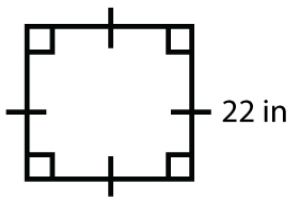
Name : _____

Score : _____ Date : _____

Finding Area of Quadrilateral Worksheet

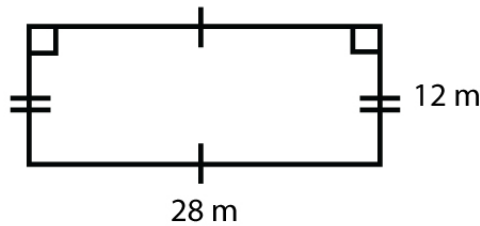
Find the area of each quadrilateral

1



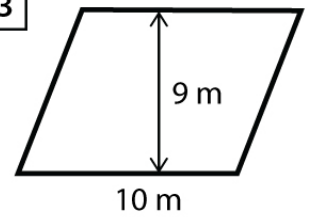
Area = _____ in²

2



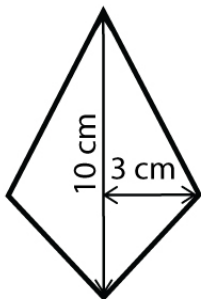
Area = _____ m²

3



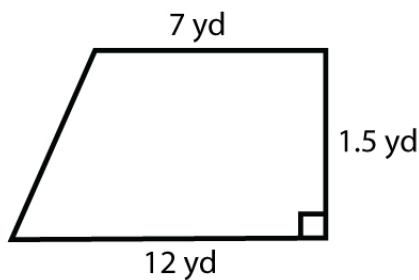
Area = _____ m²

4



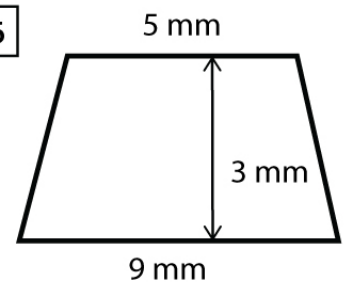
Area = _____ cm²

5



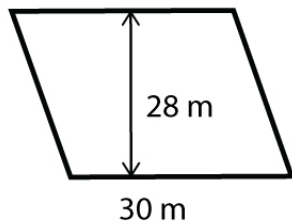
Area = _____ yd²

6



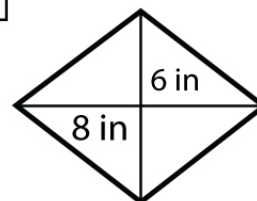
Area = _____ mm²

7



Area = _____ m²

8



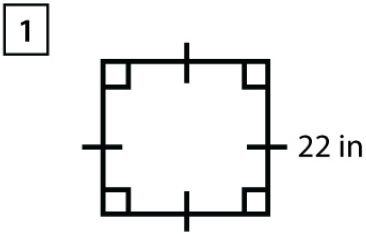
Area = _____ in²

Name : _____

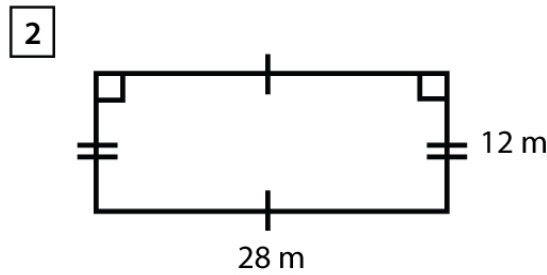
Score : _____ Date : _____

Finding Area of Quadrilateral Worksheet

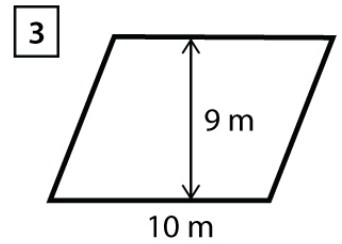
Answers



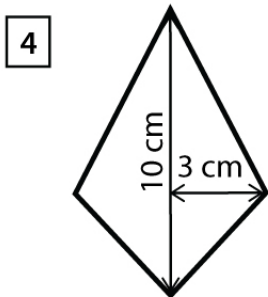
Area = 484 in²



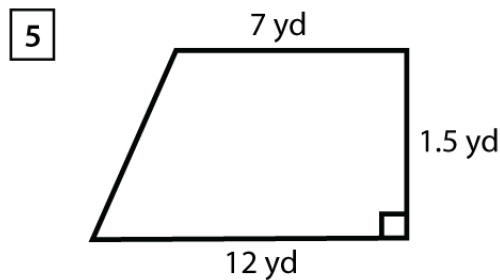
Area = 336 m²



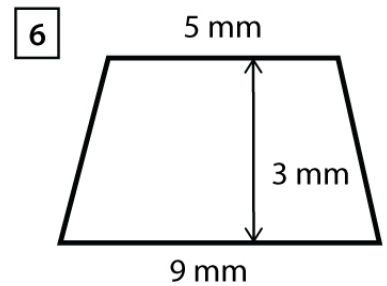
Area = 90 m²



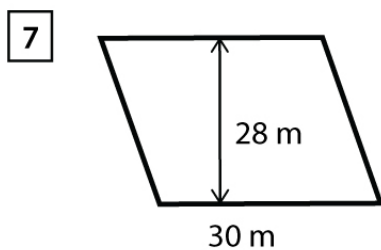
Area = 30 cm²



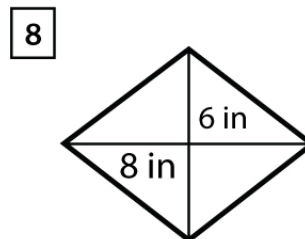
Area = 14.25 yd²



Area = 21 mm²



Area = 840 m²



Area = 24 in²