

Name : \_\_\_\_\_

Score : \_\_\_\_\_ Date : \_\_\_\_\_

**Classifying Quadrilaterals Worksheet**

For each answer circle the correct option given in the answers below

1



- a) Rhombus
- b) Parallelogram
- c) Rectangle
- d) Square

2



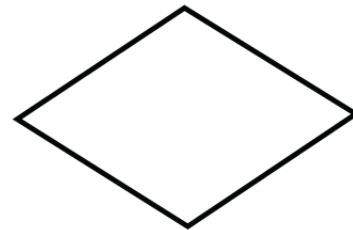
- a) Rectangle
- b) Parallelogram
- c) Square
- d) Trapezoid

3



- a) Square
- b) Parallelogram
- c) Rectangle
- d) Trapezoid

4



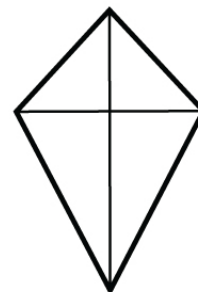
- a) Rhombus
- b) Parallelogram
- c) Rectangle
- d) Trapezoid

5



- a) Square
- b) Rectangle
- c) Parallelogram
- d) Trapezoid

6



- a) Kite
- b) Square
- c) Rhombus
- d) Rectangle

Name : \_\_\_\_\_

Score : \_\_\_\_\_ Date : \_\_\_\_\_

Classifying Quadrilaterals Worksheet

Answers

1



- a) Rhombus c) Rectangle  
b) Parallelogram d) Square

2



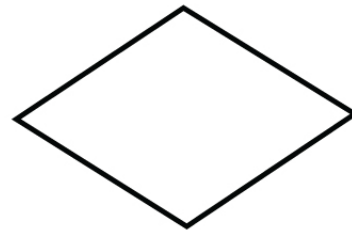
- a) Rectangle c) Square  
b) Parallelogram d) Trapezoid

3



- a) Square c) Rectangle  
b) Parallelogram d) Trapezoid

4



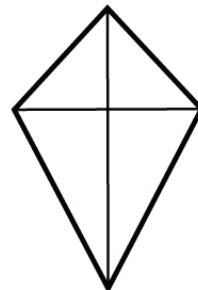
- a) Rhombus c) Rectangle  
b) Parallelogram d) Trapezoid

5



- a) Square c) Parallelogram  
b) Rectangle d) Trapezoid

6



- a) Kite c) Rhombus  
b) Square d) Rectangle