

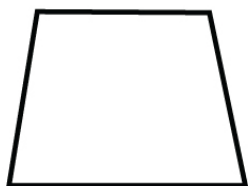
Name : \_\_\_\_\_

Score : \_\_\_\_\_ Date : \_\_\_\_\_

**Classifying Quadrilaterals Worksheet**

Classify the give quadrilaterals based on their shape

1




\_\_\_\_\_

2



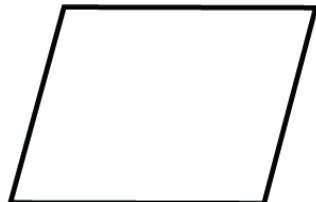
\_\_\_\_\_

3



\_\_\_\_\_

4



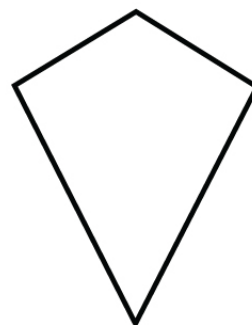
\_\_\_\_\_

5



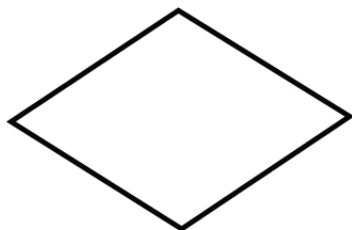
\_\_\_\_\_

6



\_\_\_\_\_

7



\_\_\_\_\_

8



\_\_\_\_\_

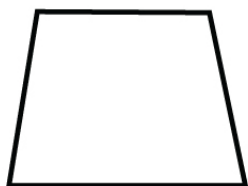
Name : \_\_\_\_\_

Score : \_\_\_\_\_ Date : \_\_\_\_\_

Classifying Quadrilaterals Worksheet

Answers

1




Trapezoid

2



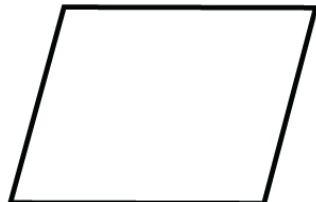
Rectangle

3



Isosceles  
Trapezoid

4



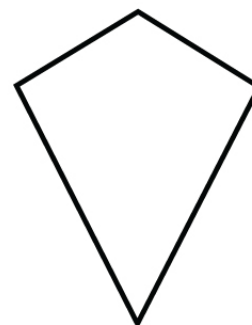
Parallelogram

5



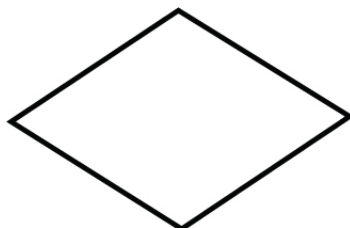
Square

6




Kite

7



Rhombus

8



Rectangle