


Name : _____

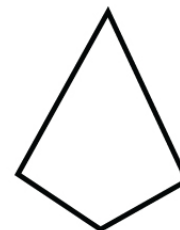
Score : _____ Date : _____

Identifying Quadrilaterals Worksheet



Match the shapes with their names



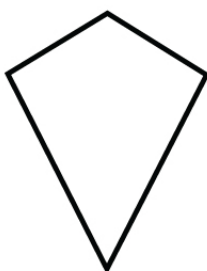
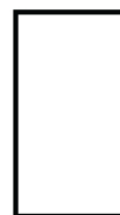
Trapezoid



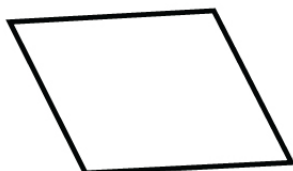
Parallelogram



Kite



Square



Rectangle



Name : _____

Score : _____ Date : _____

Identifying Quadrilaterals Worksheet

Answers

