

Name : \_\_\_\_\_

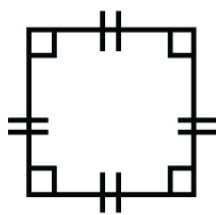
Score : \_\_\_\_\_ Date : \_\_\_\_\_

Identifying the type of each Quadrilateral

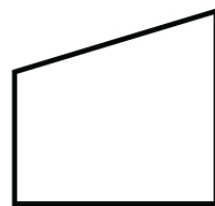
1



2



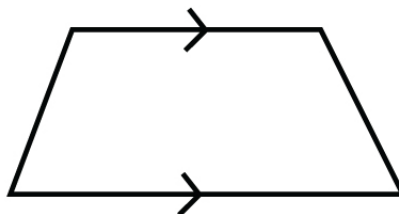
3



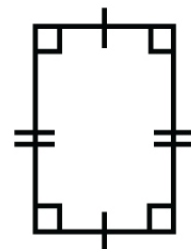
4



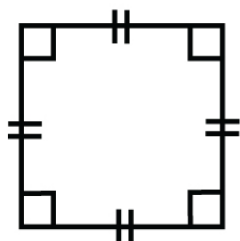
5



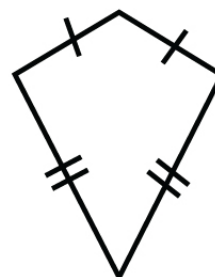
6



7



8



Name : \_\_\_\_\_

Score : \_\_\_\_\_ Date : \_\_\_\_\_

Identifying the type of each Quadrilateral

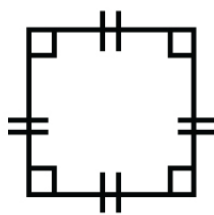
Answers

1



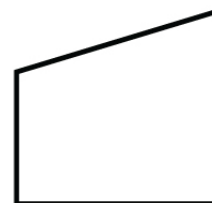
Rectangle

2



Square

3



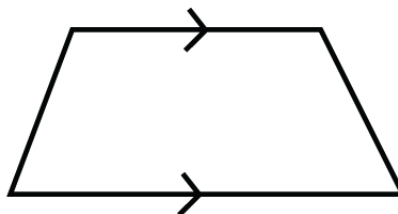
Trapezoid

4



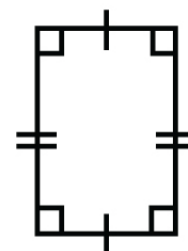
Parallelogram

5



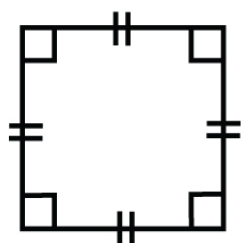
Trapezoid

6



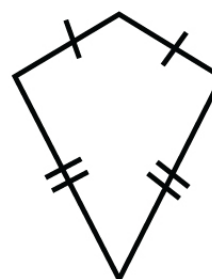
Rectangle

7



Square

8



Kite