

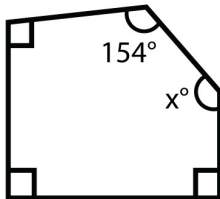
Name : _____

Score : _____ Date : _____

Angles in Irregular Polygon Worksheet

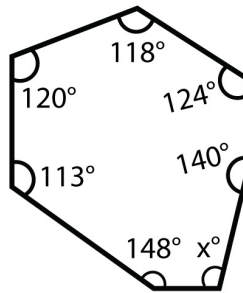
Find the missing angle in each irregular polygon.

1



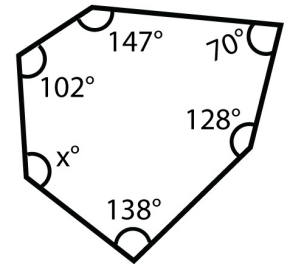
$x^\circ =$ _____

2



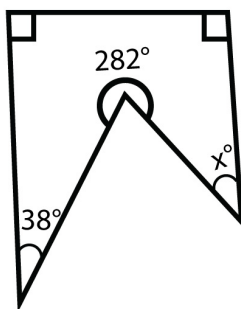
$x^\circ =$ _____

3



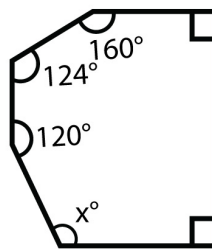
$x^\circ =$ _____

4



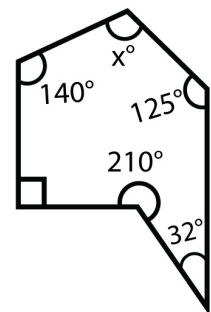
$x^\circ =$ _____

5



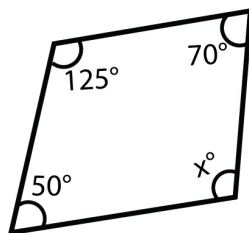
$x^\circ =$ _____

6



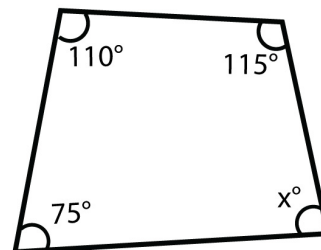
$x^\circ =$ _____

7



$x^\circ =$ _____

8



$x^\circ =$ _____

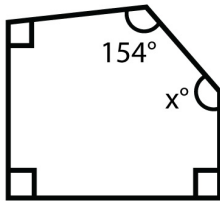
Name : _____

Score : _____ Date : _____

Angles in Irregular Polygon Worksheet

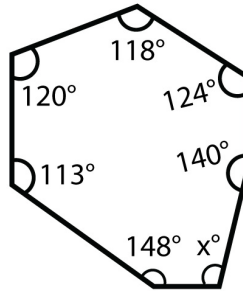
Answers

1



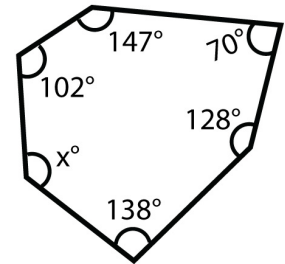
$x^\circ = 116^\circ$

2



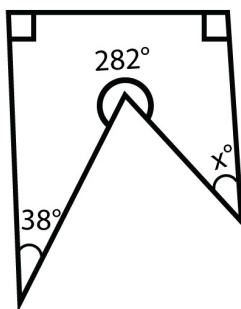
$x^\circ = 137^\circ$

3



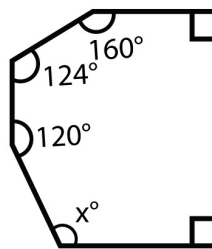
$x^\circ = 135^\circ$

4



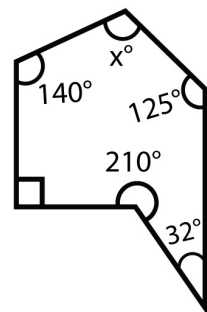
$x^\circ = 40^\circ$

5



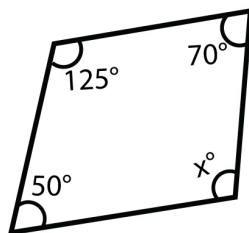
$x^\circ = 136^\circ$

6



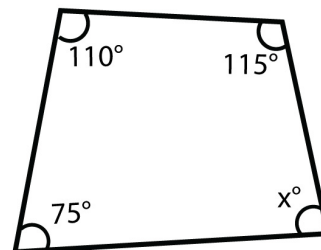
$x^\circ = 123^\circ$

7



$x^\circ = 115^\circ$

8



$x^\circ = 60^\circ$