

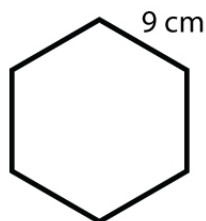
Name : _____

Score : _____ Date : _____

Area of a Hexagon Worksheet

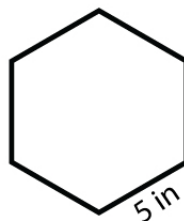
Find the area of following hexagons

1



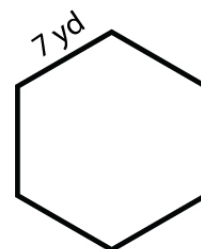
Area = _____

2



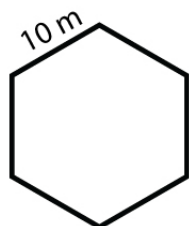
Area = _____

3



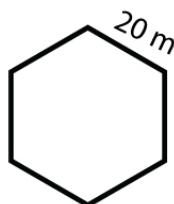
Area = _____

4



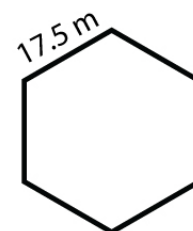
Area = _____

5



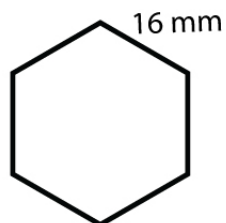
Area = _____

6



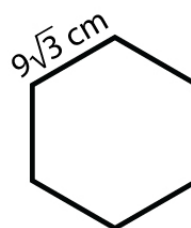
Area = _____

7



Area = _____

8



Area = _____

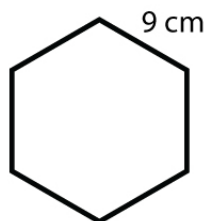
Name : _____

Score : _____ Date : _____

Area of a Hexagon Worksheet

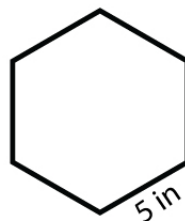
Answers

1



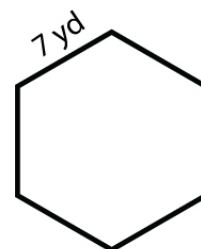
Area = 210.44 cm²

2



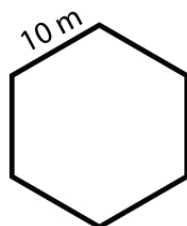
Area = 64.95 in²

3



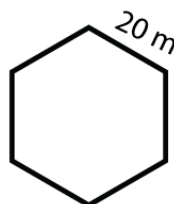
Area = 127.30 yd²

4



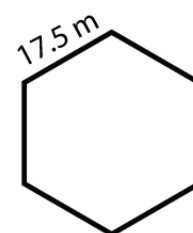
Area = 259.80 m²

5



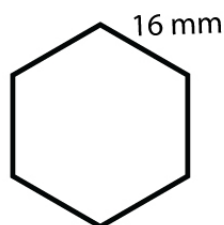
Area = 1039.23 m²

6



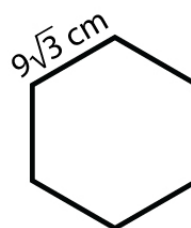
Area = 795.66 m²

7



Area = 665.10 mm²

8



Area = 630.64 cm²