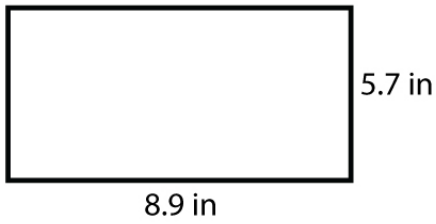


Name : _____

Score : _____ Date : _____

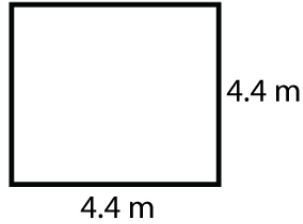
Finding the Area of Polygons Worksheet

1



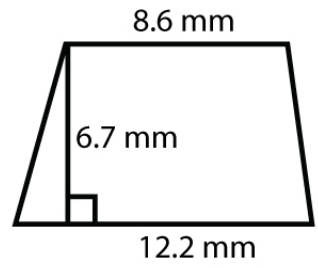
Area = _____

2



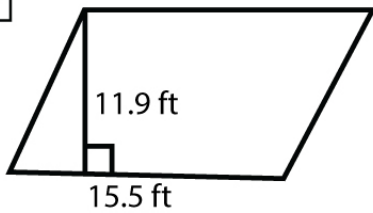
Area = _____

3



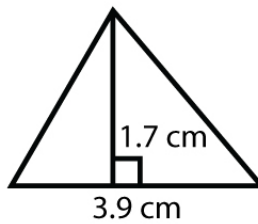
Area = _____

4



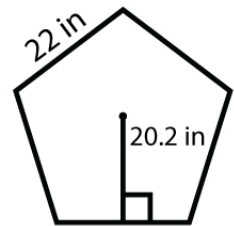
Area = _____

5



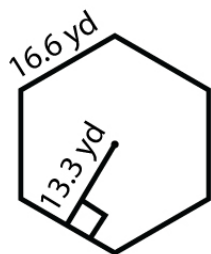
Area = _____

6



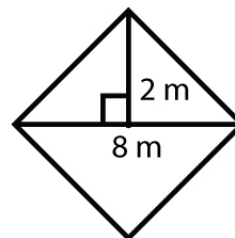
Area = _____

7



Area = _____

8



Area = _____


Name : _____

Score : _____ Date : _____

Finding the Area of Polygons Worksheet

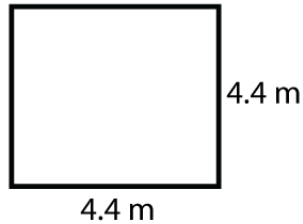
Answers

1



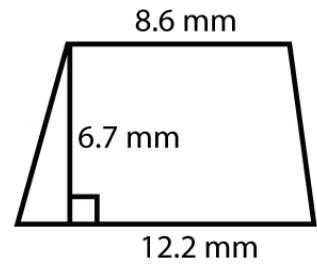
Area = 50.73 in²

2



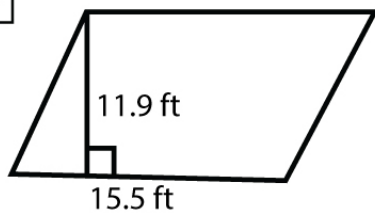
Area = 19.36 m²

3



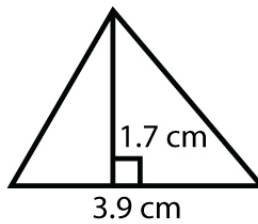
Area = 69.68 mm²

4



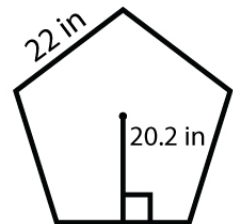
Area = 184.45 ft²

5



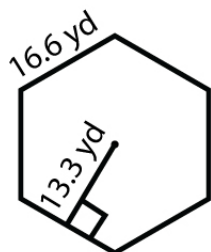
Area = 3.315 cm²

6



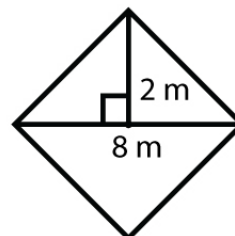
Area = 1,111 in²

7



Area = 662.34 yd²

8



Area = 16 m²