

Name : _____

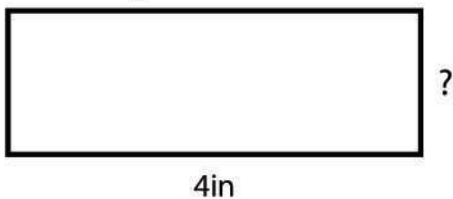
Score : _____ Date : _____

Finding the Missing Length of Polygon Worksheet

Find the length of the missing side in each polygon

1

Given, Perimeter = 10in



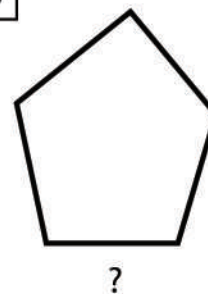
2

Given,
Perimeter = 20yd

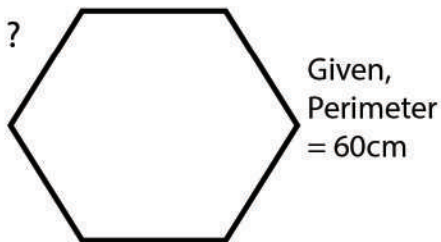


3

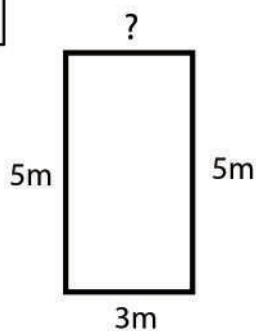
Given,
Perimeter = 15ft



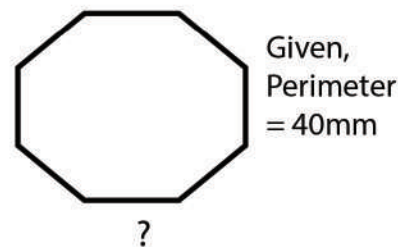
4



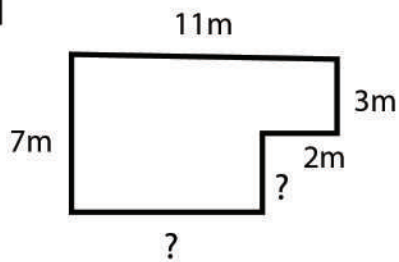
5



6



7



8

