

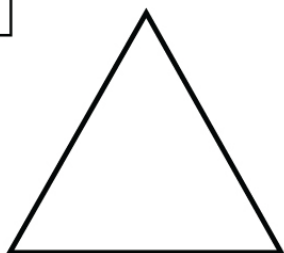
Name : _____

Score : _____ Date : _____


Identifying Polygons Worksheet

Identify and name each polygon

1



2



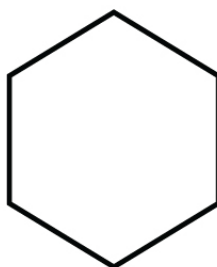
3



4



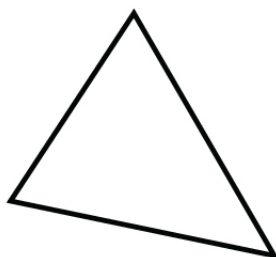
5



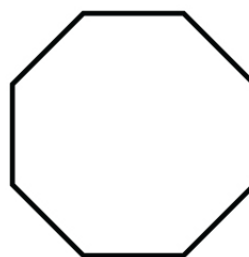
6



7



8



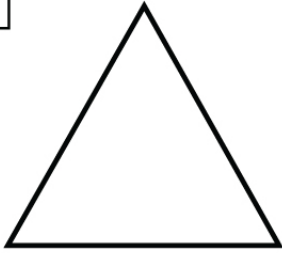
Name : _____

Score : _____ Date : _____

Identifying Polygons Worksheet

Answers

1



Triangle

2



Rectangle

3



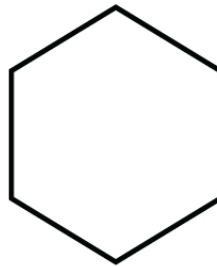
Square

4



Parallelogram

5



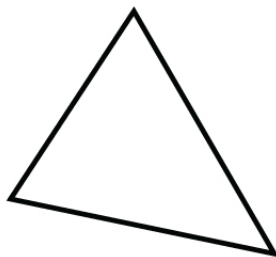
Hexagon

6



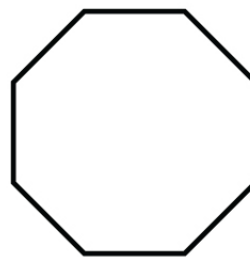
Trapezoid

7



Triangle

8



Octagon