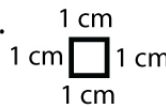


Name : _____

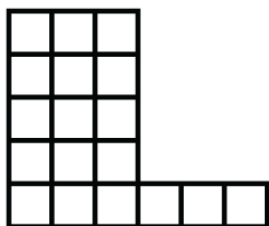
Score : _____ Date : _____

Perimeter: Counting Unit Squares

The side length of each square is 1 cm. Calculate the perimeter of each shape.

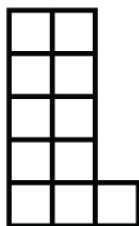


1



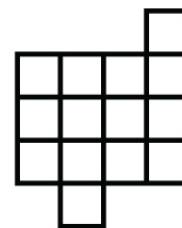
Perimeter = _____ cm

2




Perimeter = _____ cm

3



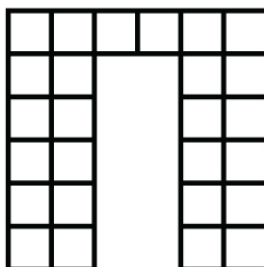
Perimeter = _____ cm

4



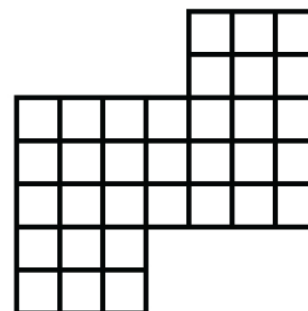
Perimeter = _____ cm

5



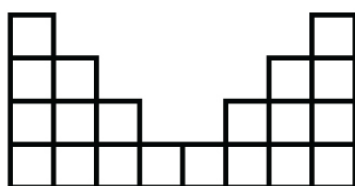
Perimeter = _____ cm

6



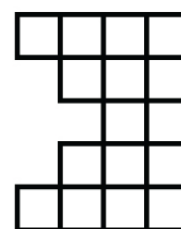
Perimeter = _____ cm

7



Perimeter = _____ cm

8



Perimeter = _____ cm

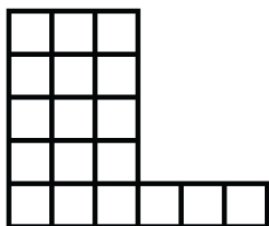
Name : _____

Score : _____ Date : _____

Perimeter: Counting Unit Squares

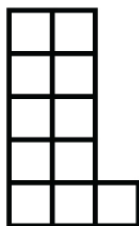
Answers

1



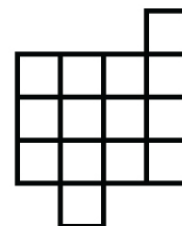
Perimeter = 22 cm

2




Perimeter = 16 cm

3



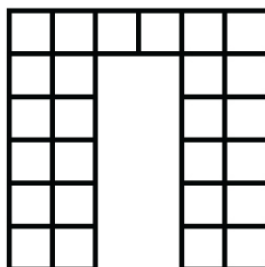
Perimeter = 18 cm

4



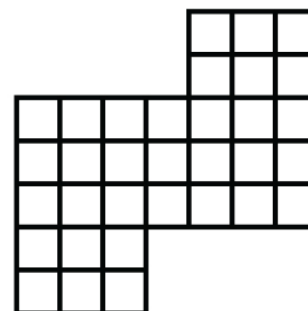
Perimeter = 28 cm

5



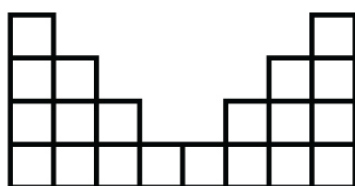
Perimeter = 34 cm

6




Perimeter = 28 cm

7



Perimeter = 30 cm

8



Perimeter = 22 cm