

Name : \_\_\_\_\_

Score : \_\_\_\_\_ Date : \_\_\_\_\_

**Naming Polygon Worksheet**

Use a ruler to draw a line to complete each shape. Name the shape formed.

1



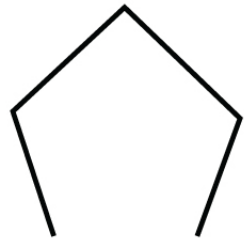
\_\_\_\_\_

2




\_\_\_\_\_

3



\_\_\_\_\_

4



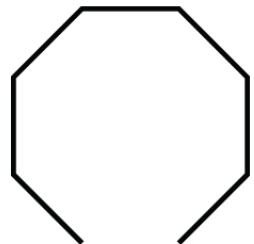
\_\_\_\_\_

5



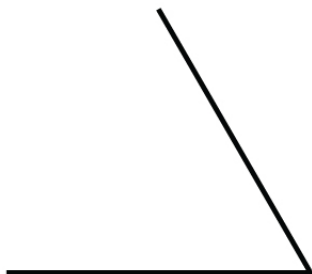
\_\_\_\_\_

6




\_\_\_\_\_

7



\_\_\_\_\_

8



\_\_\_\_\_

Name : \_\_\_\_\_

Score : \_\_\_\_\_ Date : \_\_\_\_\_

**Naming Polygon Worksheet**

Answers

1



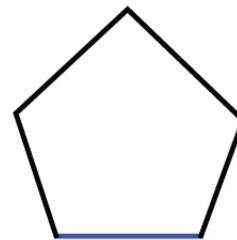
Rectangle

2



Parallelogram

3




Pentagon

4



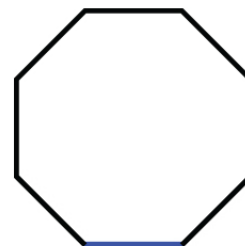
Square

5



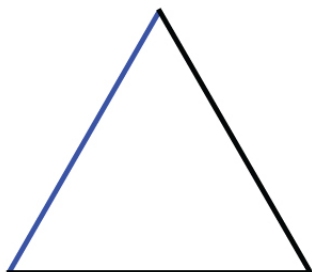
Trapezoid

6




Octagon

7



Triangle

8



Trapezoid