

Name : _____

Score : _____ Date : _____

Regular Polygon Worksheet

Identify the polygon and count its number of sides

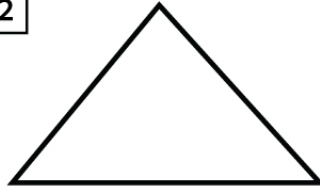
1



Name _____

No of sides _____

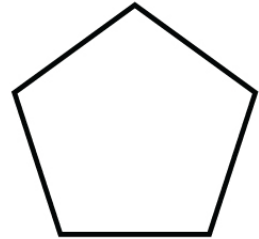
2



Name _____

No of sides _____

3



Name _____

No of sides _____

4



Name _____

No of sides _____


5



Name _____

No of sides _____

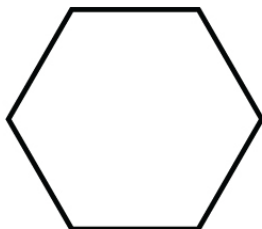
6



Name _____

No of sides _____

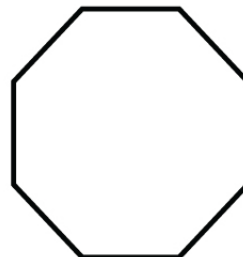
7



Name _____

No of sides _____

8



Name _____

No of sides _____

Name : _____

Score : _____ Date : _____

Regular Polygon Worksheet

Answers

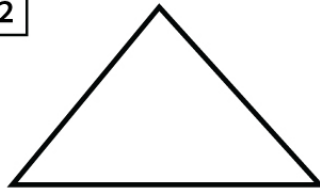
1



Name Square

No of sides 4

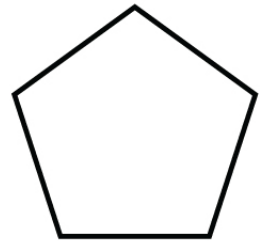
2



Name Triangle

No of sides 3

3



Name Pentagon

No of sides 5

4



Name Rectangle

No of sides 4

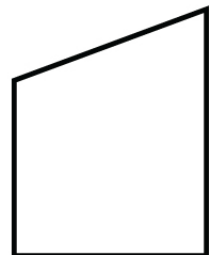
5



Name Isosceles Trapezoid

No of sides 4

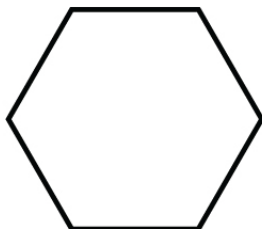
6



Name Trapezoid

No of sides 4

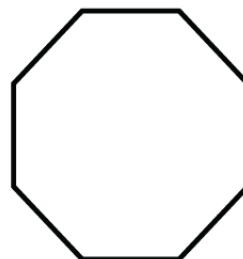
7



Name Hexagon

No of sides 6

8



Name Octagon

No of sides 8