


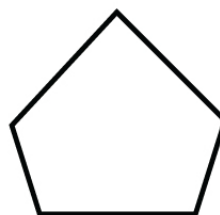
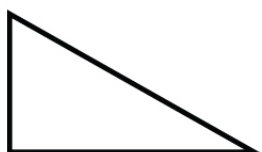
Name : _____

Score : _____ Date : _____

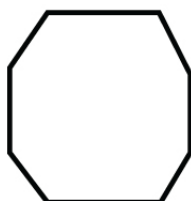
Properties of Polygon Worksheet

Color the appropriate polygon with desired properties

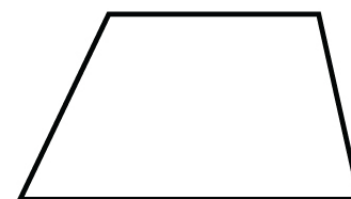
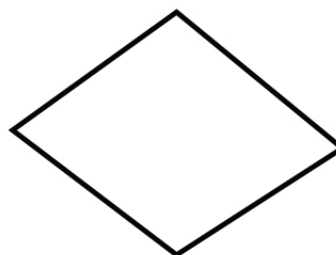
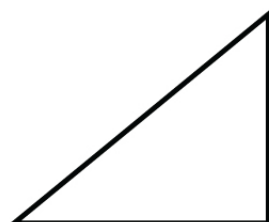
A) Polygon with all right angles



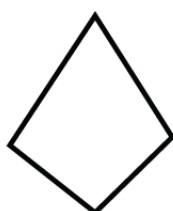
B) Polygon with two pairs of parallel sides



C) Polygon with one pair of parallel sides



D) All the sides are the same length, and all the angles are of same measure




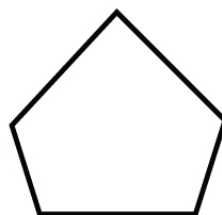
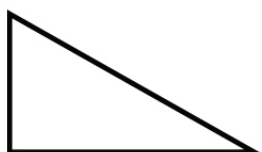
Name : _____

Score : _____ Date : _____

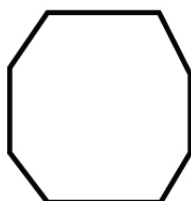
Properties of Polygon Worksheet

Answers


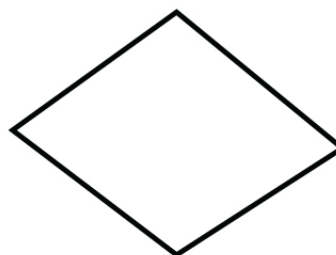
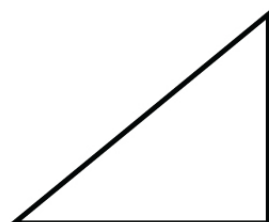
A) Polygon with all right angles



B) Polygon with two pairs of parallel sides



C) Polygon with one pair of parallel sides



D) All the sides are the same length, and all the angles are of same measure

