

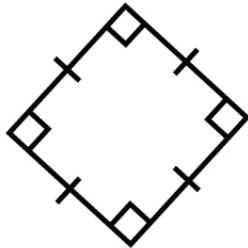
Name : \_\_\_\_\_

Score : \_\_\_\_\_ Date : \_\_\_\_\_

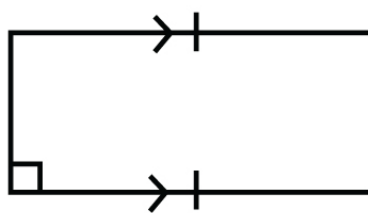
Properties of Rhombuses, Rectangles and Squares Worksheet

Identify whether the parallelogram is a rhombus, a rectangle or a square. Give reasons.

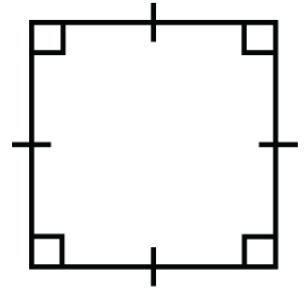
1



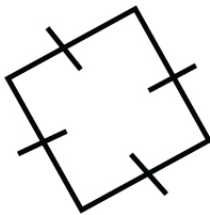
2



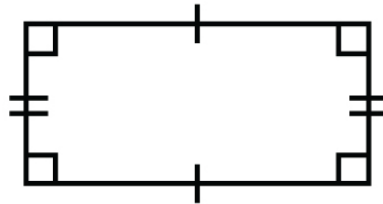
3



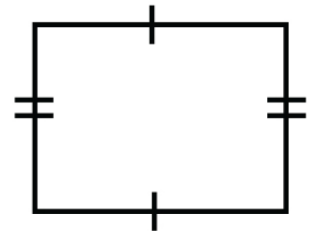
4



5

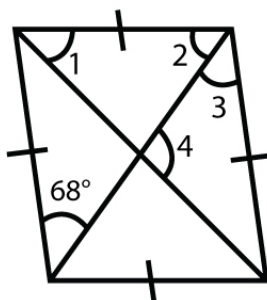


6

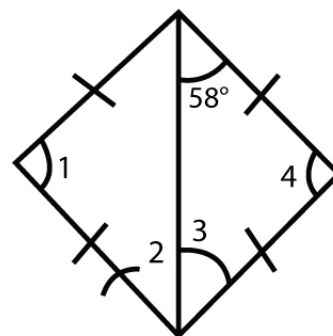


Find the measure of the numbered angles in each rhombus

7



8



Name : \_\_\_\_\_

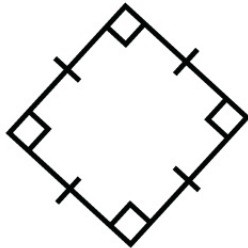
Score : \_\_\_\_\_ Date : \_\_\_\_\_

**Properties of Rhombuses, Rectangles and Squares Worksheet**

**Answers**

Identify whether the parallelogram is a rhombus, a rectangle or a square. Give reasons.

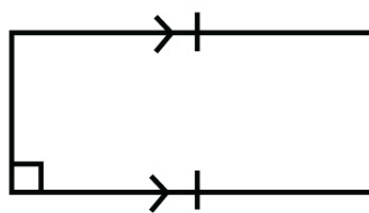
1



**Square**

- 4 sides equal
- 4 interior angles are right angles

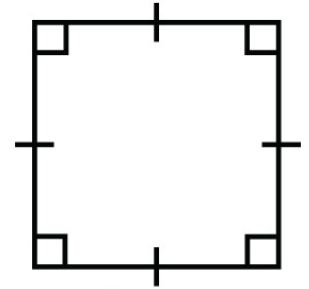
2



**Rectangle**

- Opposite sides are equal and parallel
- 4 interior angles are right angles

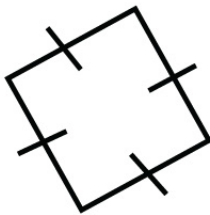
3



**Square**

- 4 sides are equal
- 4 interior angles are right angles

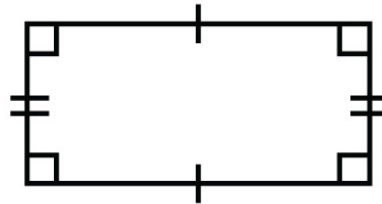
4



**Rhombus**

- 4 sides are equal
- 4 interior angles are not right angles

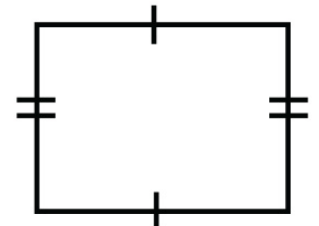
5



**Rectangle**

- Opposite sides are equal
- 4 interior angles are right angles

6

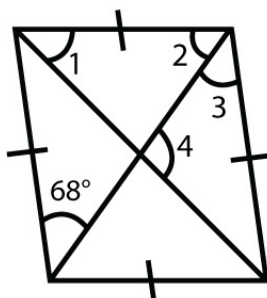


**Rectangle**

- Opposite sides equal

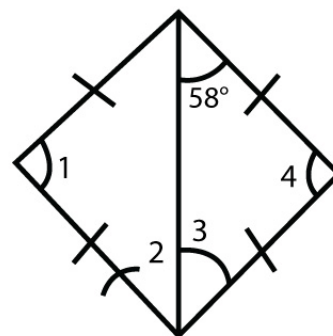
Find the measure of the numbered angles in each rhombus

7



$\angle 1 = 22^\circ, \angle 2 = 68^\circ, \angle 3 = 68^\circ, \angle 4 = 90^\circ$

8



$\angle 1 = 64^\circ, \angle 2 = 58^\circ, \angle 3 = 58^\circ, \angle 4 = 64^\circ$