

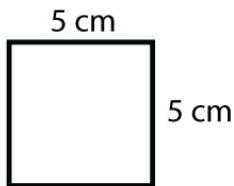
Name : _____

Score : _____ Date : _____

Square - Area & Perimeter

Find the area and perimeter of each square.

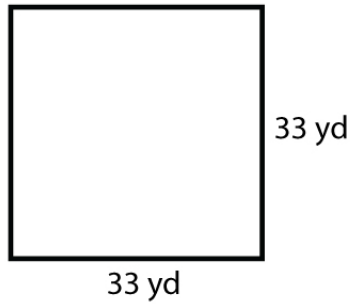
1



Area = _____

Perimeter = _____

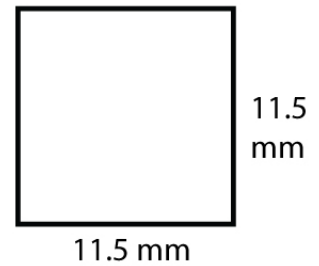
2



Area = _____

Perimeter = _____

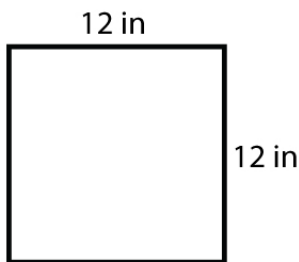
3



Area = _____

Perimeter = _____

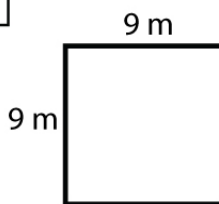
4



Area = _____

Perimeter = _____

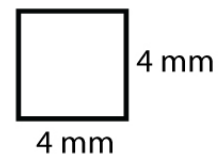
5



Area = _____

Perimeter = _____

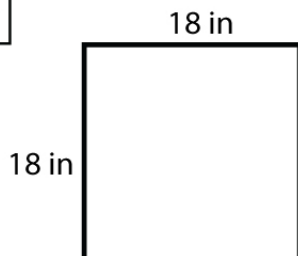
6



Area = _____

Perimeter = _____

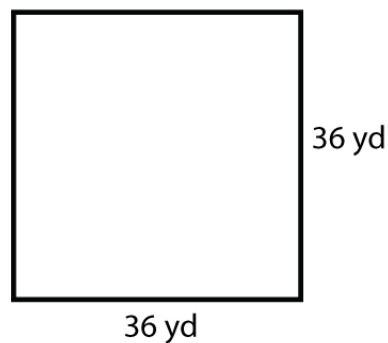
7



Area = _____

Perimeter = _____

8



Area = _____

Perimeter = _____

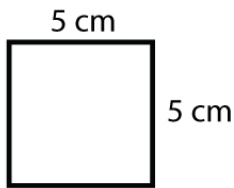
Name : _____

Score : _____ Date : _____

Square - Area & Perimeter

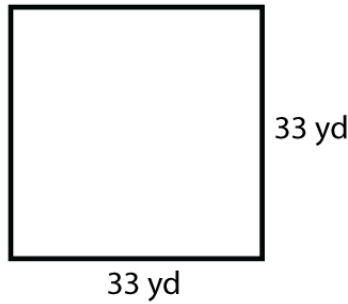
Answers

1



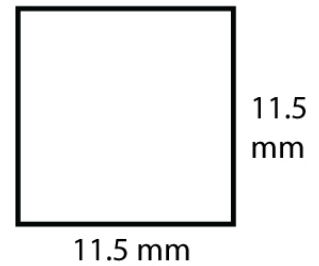
Area = 25 cm²
Perimeter = 20 cm

2



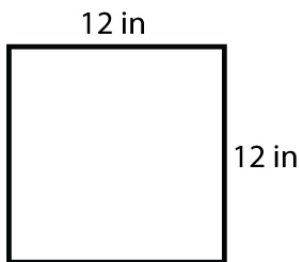
Area = 1,089 yd²
Perimeter = 132 yd

3



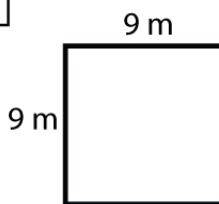
Area = 132.25 mm²
Perimeter = 46 mm

4



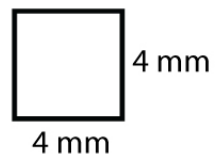
Area = 144 in²
Perimeter = 48 in

5



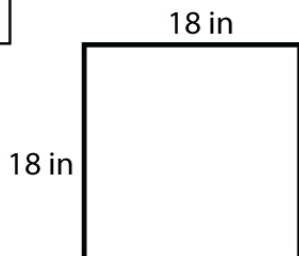
Area = 81 m²
Perimeter = 36 m

6



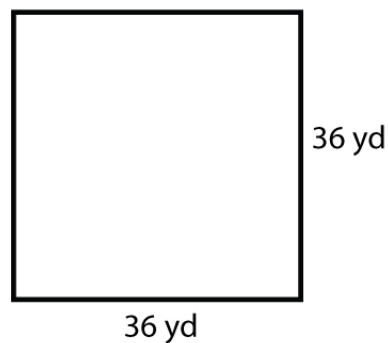
Area = 16 mm²
Perimeter = 16 mm

7



Area = 324 in²
Perimeter = 72 in

8



Area = 1,296 yd²
Perimeter = 144 yd