

Name : \_\_\_\_\_

Score : \_\_\_\_\_ Date : \_\_\_\_\_

**Convex and Concave Polygon Worksheet**

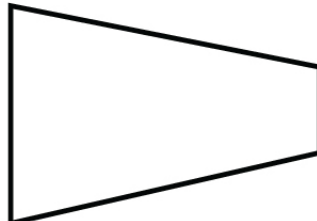
Identify each polygon as convex or concave

1



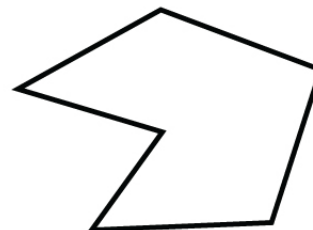
\_\_\_\_\_

2



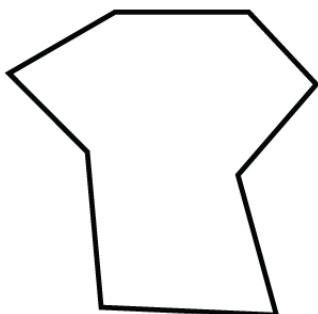
\_\_\_\_\_

3



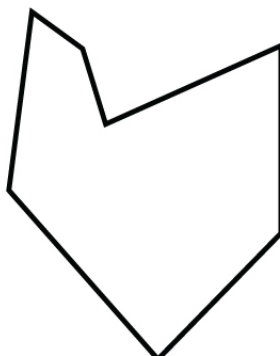
\_\_\_\_\_

4




\_\_\_\_\_

5



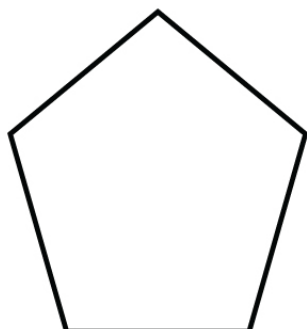
\_\_\_\_\_

6



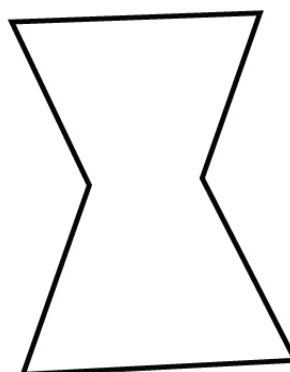
\_\_\_\_\_

7



\_\_\_\_\_

8



\_\_\_\_\_


Name : \_\_\_\_\_

Score : \_\_\_\_\_ Date : \_\_\_\_\_

Convex and Concave Polygon Worksheet

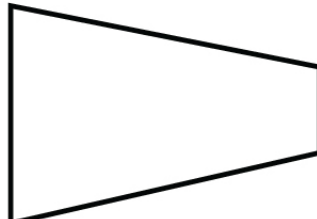
Answers

1



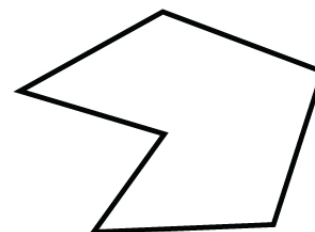
Convex

2



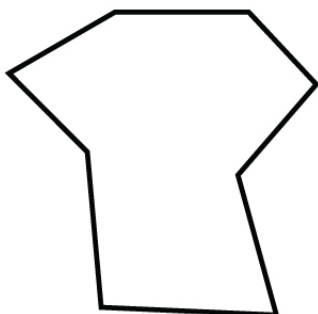
Convex

3



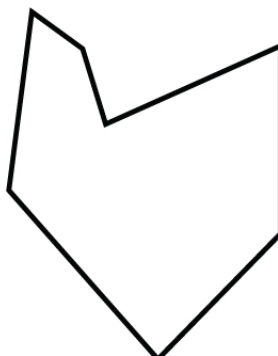
Concave

4




Concave

5



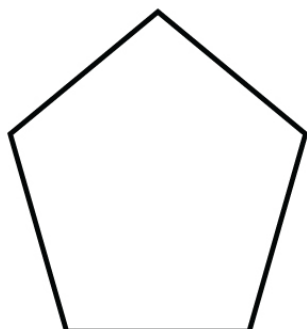
Concave

6



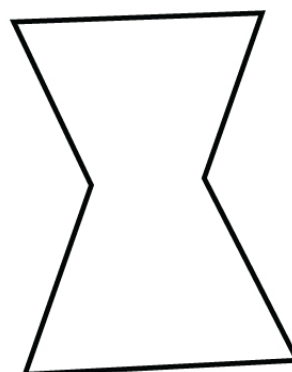
Convex

7



Convex

8



Concave