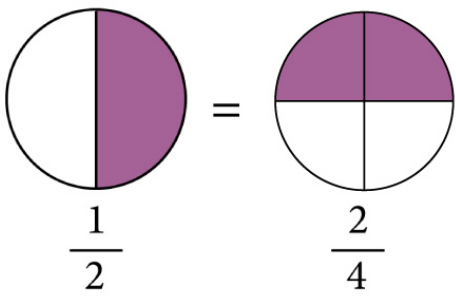


Name: .....

# Equivalent Fraction Worksheet

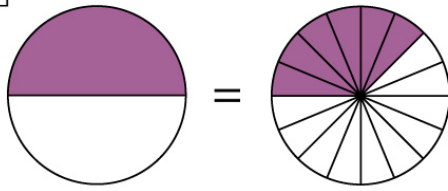
Shade and write the equivalent fractions of the fraction  $\frac{1}{2}$  as shown.

Solved example:



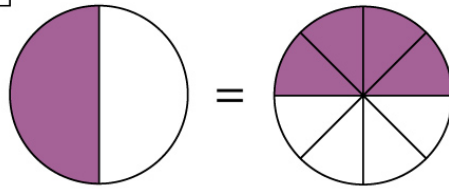
$\frac{1}{2} = \frac{2}{4}$

1



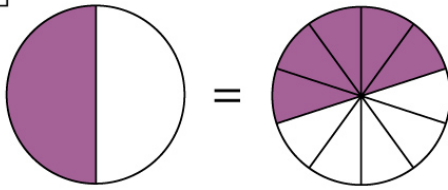
\_\_\_\_\_ = \_\_\_\_\_

2



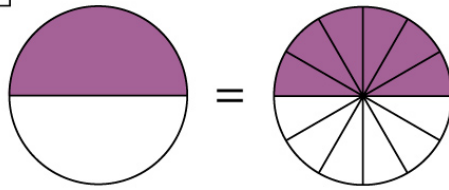
\_\_\_\_\_ = \_\_\_\_\_

3



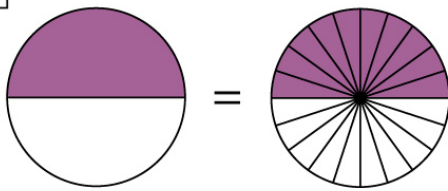
\_\_\_\_\_ = \_\_\_\_\_

4




\_\_\_\_\_ = \_\_\_\_\_

5



\_\_\_\_\_ = \_\_\_\_\_

6



\_\_\_\_\_ = \_\_\_\_\_

Name: .....

# Equivalent Fraction Worksheet

## Answers

Solved example:

