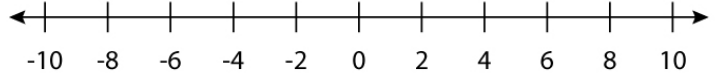


Name : _____

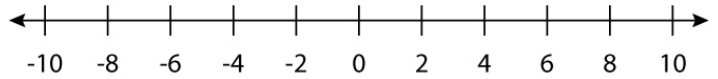
Graphing Inequalities on a Number Line

Sketch the given inequalities on a number line.

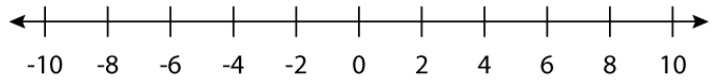
① $x < -1$



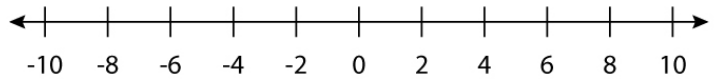
② $x > -6$



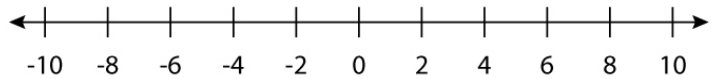
③ $x \leq -4$



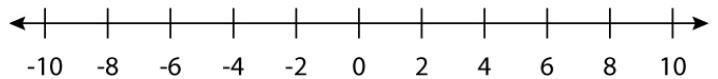
④ $x \geq -5$



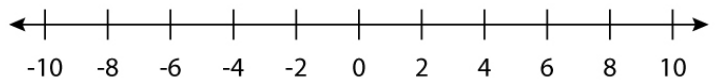
⑤ $x > -8$



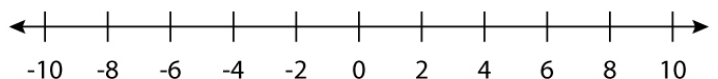
⑥ $x \geq -3$



⑦ $x \leq 6$



⑧ $x < 9$

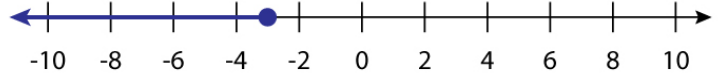


Name : _____

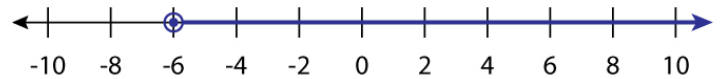
Graphing Inequalities on a Number Line

Answers

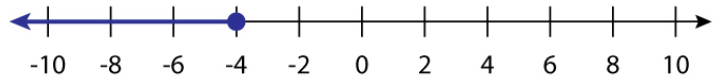
① $x < -1$



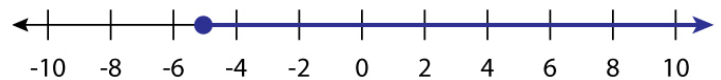
② $x > -6$



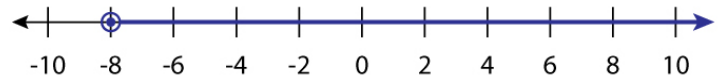
③ $x \leq -4$



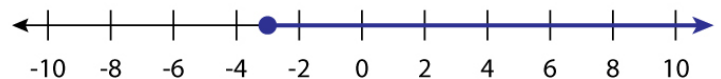
④ $x \geq -5$



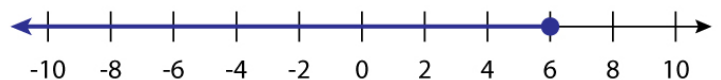
⑤ $x > -8$



⑥ $x \geq -3$



⑦ $x \leq 6$



⑧ $x < 9$

