

Name : _____

Inequalities Worksheet

Draw each inequality on a number line.

1 $p \geq -3$

2 $-3 < n < 0$

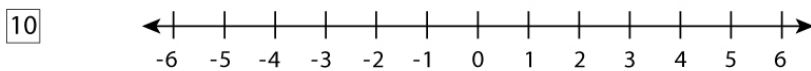
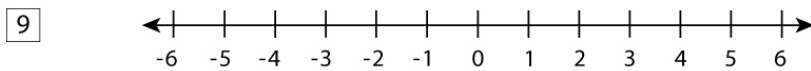
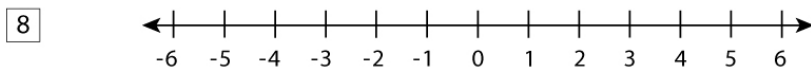
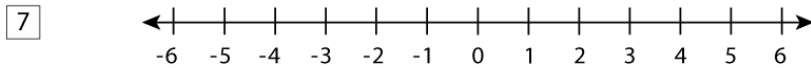
3 $-4 \leq n < 4$

4 $n > -1$

5 $n < 5$

6 $n \geq -1$

Write the inequalities for the given number lines.

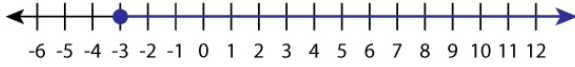


Name : _____

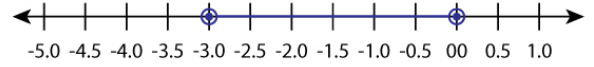
Inequalities Worksheet

Answers

1 $p \geq -3$



2 $-3 < n < 0$



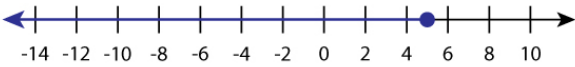
3 $-4 \leq n < 4$



4 $n > -1$



5 $n < 5$



6 $n \geq -1$



7



$-4 \leq n < 3$

8



$n \geq -5$

9



$n < 2$

10



$1 < n < 4$