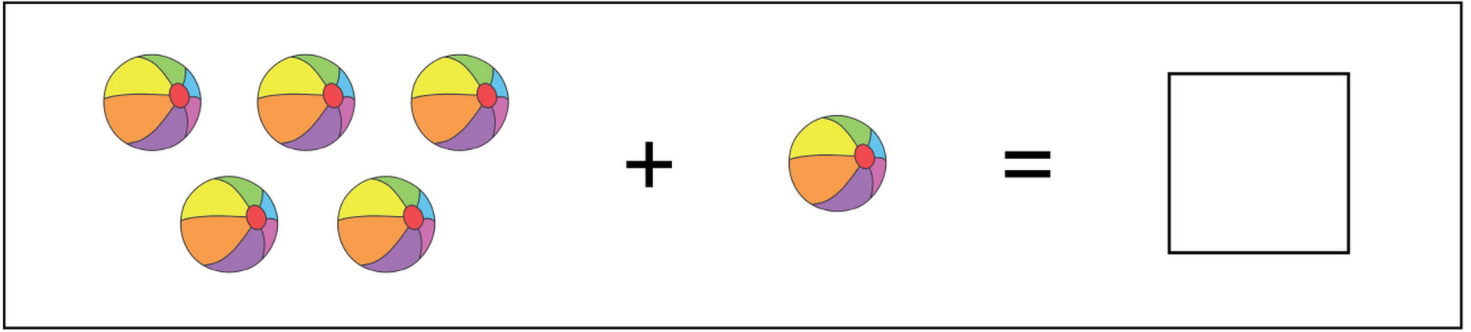



# FUN WITH ADDITION


Count and write the total sum in the box.



5 beach balls + 1 beach ball =



3 smiley suns + 2 smiley suns =



5 ice cream cones + 4 ice cream cones =

Write the sum.

$$\begin{array}{r} 3 \\ + 1 \\ \hline \end{array}$$

$$\begin{array}{r} 5 \\ + 6 \\ \hline \end{array}$$

$$\begin{array}{r} 6 \\ + 2 \\ \hline \end{array}$$

$$\begin{array}{r} 4 \\ + 3 \\ \hline \end{array}$$

$$\begin{array}{r} 2 \\ + 7 \\ \hline \end{array}$$


$$\begin{array}{r} 6 \\ + 3 \\ \hline \end{array}$$

$$\begin{array}{r} 5 \\ + 5 \\ \hline \end{array}$$


$$\begin{array}{r} 1 \\ + 8 \\ \hline \end{array}$$

# FUN WITH ADDITION


## Answers



5 beach balls + 1 beach ball = 6



3 suns + 2 suns = 5



5 ice cream cones + 4 ice cream cones = 9

$$\begin{array}{r} 3 \\ + 1 \\ \hline 4 \end{array}$$

$$\begin{array}{r} 5 \\ + 6 \\ \hline 11 \end{array}$$

$$\begin{array}{r} 6 \\ + 2 \\ \hline 8 \end{array}$$

$$\begin{array}{r} 4 \\ + 3 \\ \hline 7 \end{array}$$

$$\begin{array}{r} 2 \\ + 7 \\ \hline 9 \end{array}$$

$$\begin{array}{r} 6 \\ + 3 \\ \hline 9 \end{array}$$

$$\begin{array}{r} 5 \\ + 5 \\ \hline 10 \end{array}$$

$$\begin{array}{r} 1 \\ + 8 \\ \hline 9 \end{array}$$