





Mental Maths - Addition

1	$25 + 12 =$	
2	Write down the next number: 42, 43, 44, 45, _____	
3	Add Eighty Three and Twenty Five. Write your answer in numbers.	
4	Work out. $4 + 6 + 4 + 2 + 15$	
5	Add: $13 + 19 + 3$	
6	Add the sets of circles and Squares and write the total. 	
7	How many circles are there? 	
8	Choose the correct option. a) $65 + 72 = \underline{149}$ b) $73 + 45 = \underline{118}$ c) $67 + 25 = \underline{91}$	

Mental Maths - Addition

Answers

1	$25 + 12 =$	37
2	Write down the next number: 42, 43, 44, 45, ____	46
3	Add Eighty Three and Twenty Five. Write your answer in numbers.	108
4	Work out. $4 + 6 + 4 + 2 + 15$	31
5	Add: $13 + 19 + 3$	35
6	Add the sets of circles and Squares and write the total. 	16
7	How many circles are there? 	7
8	Choose the correct option. a) $65 + 72 = \underline{149}$ b) $73 + 45 = \underline{118}$ c) $67 + 25 = \underline{91}$	b) $73 + 45 = 118$