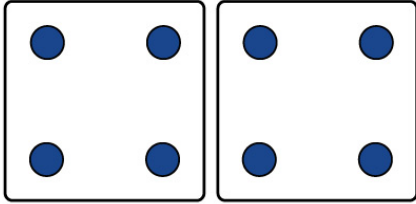


Name: .....

Date: ..... Score: .....

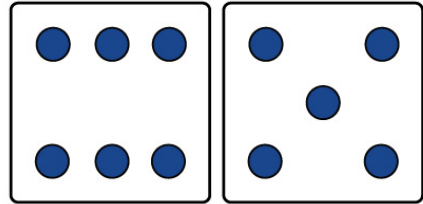
# Basic Addition Worksheet

①



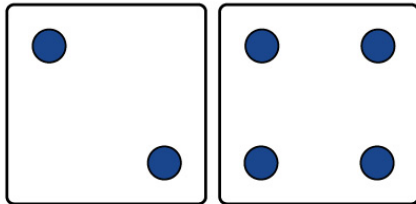
$$\underline{\quad} + \underline{\quad} = \square$$

②



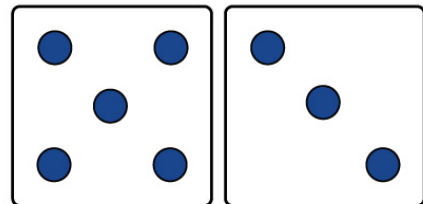
$$\underline{\quad} + \underline{\quad} = \square$$

③



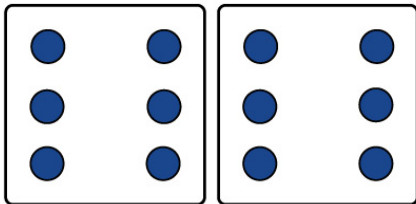
$$\underline{\quad} + \underline{\quad} = \square$$

④



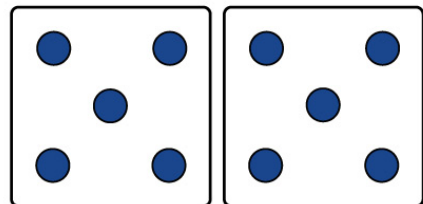
$$\underline{\quad} + \underline{\quad} = \square$$

⑤



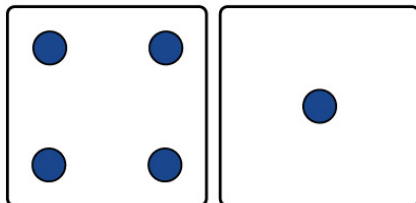
$$\underline{\quad} + \underline{\quad} = \square$$

⑥



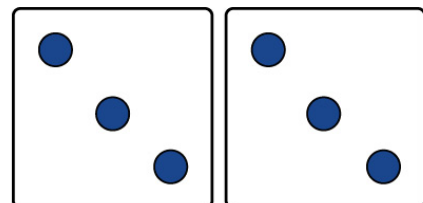
$$\underline{\quad} + \underline{\quad} = \square$$

⑦



$$\underline{\quad} + \underline{\quad} = \square$$

⑧



$$\underline{\quad} + \underline{\quad} = \square$$

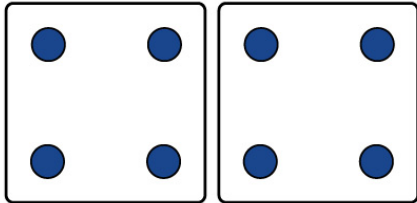
Name: .....

Date: ..... Score: .....

# Basic Addition Worksheet

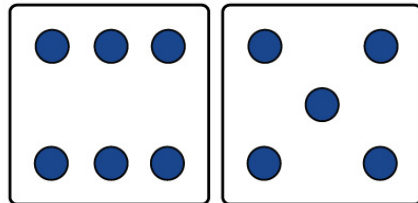
Answers

①



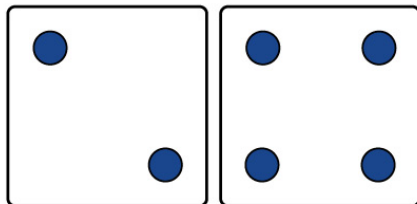
$$\underline{4} + \underline{4} = \boxed{8}$$

②



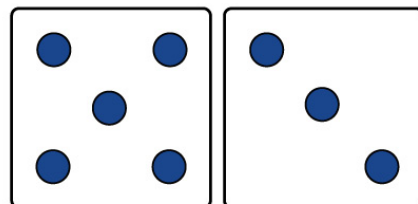
$$\underline{6} + \underline{5} = \boxed{11}$$

③




$$\underline{2} + \underline{4} = \boxed{6}$$

④



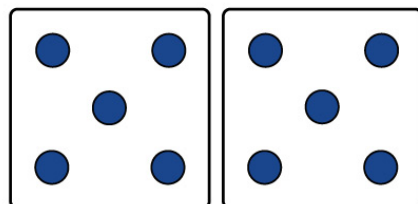
$$\underline{5} + \underline{3} = \boxed{8}$$

⑤



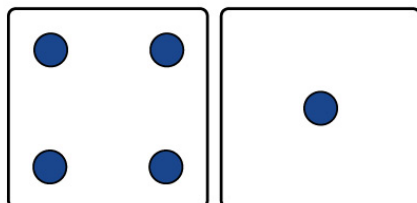
$$\underline{6} + \underline{6} = \boxed{12}$$

⑥



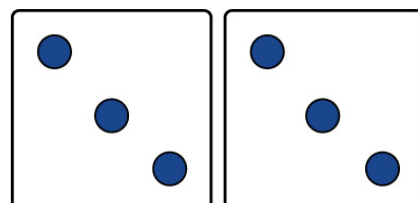
$$\underline{5} + \underline{5} = \boxed{10}$$

⑦



$$\underline{4} + \underline{1} = \boxed{5}$$

⑧



$$\underline{3} + \underline{3} = \boxed{6}$$