

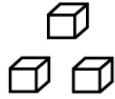
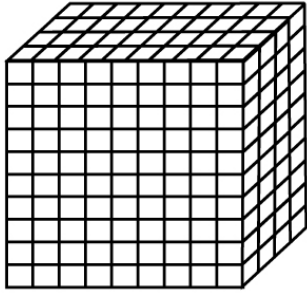
Name:

Date: Score:

Place Value Cubes Worksheet

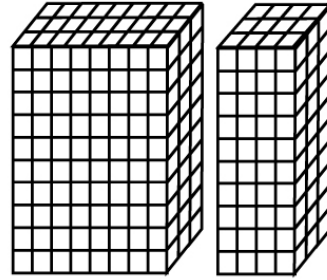
Count the total number of cubes given in the figures

①



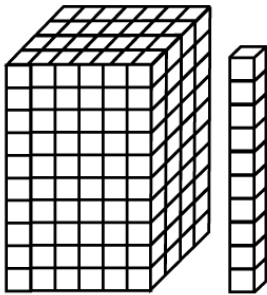
___ tens ___ ones
= ___ cubes

②



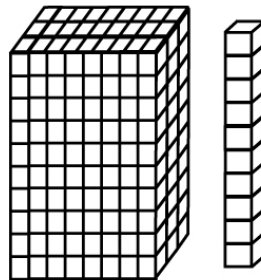
___ tens ___ ones
= ___ cubes

③



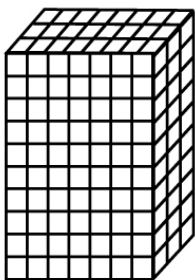
___ tens ___ ones
= ___ cubes

④



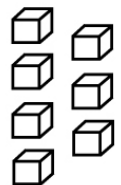
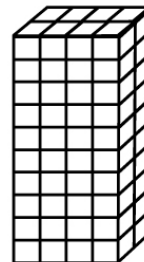
___ tens ___ ones
= ___ cubes

⑤



___ tens ___ ones
= ___ cubes

⑥



___ tens ___ ones
= ___ cubes

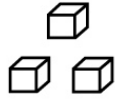
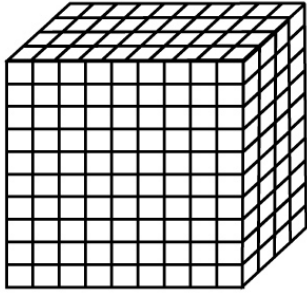
Name:

Date: Score:

Place Value Cubes Worksheet

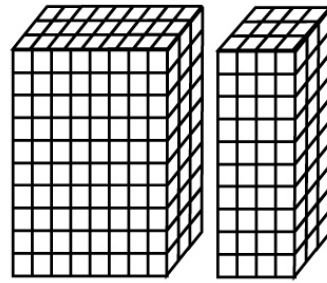
Answers

①



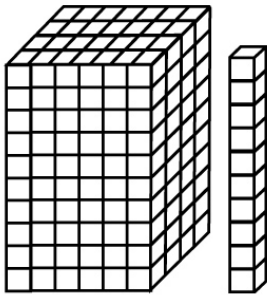
$$\begin{array}{r} \underline{36} \text{ tens} \quad \underline{3} \text{ ones} \\ = \underline{39} \text{ cubes} \end{array}$$

②



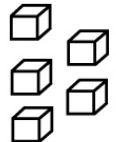
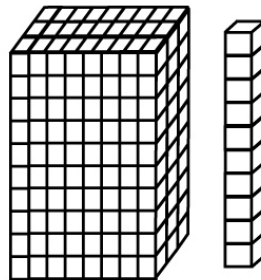
$$\begin{array}{r} \underline{36} \text{ tens} \quad \underline{0} \text{ ones} \\ = \underline{36} \text{ cubes} \end{array}$$

③




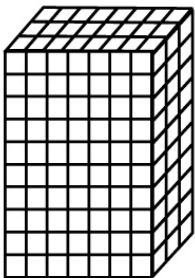
$$\begin{array}{r} \underline{25} \text{ tens} \quad \underline{0} \text{ ones} \\ = \underline{25} \text{ cubes} \end{array}$$

④



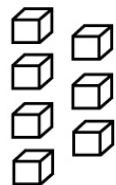
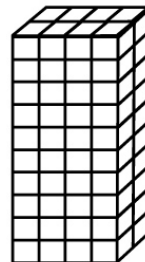
$$\begin{array}{r} \underline{25} \text{ tens} \quad \underline{5} \text{ ones} \\ = \underline{30} \text{ cubes} \end{array}$$

⑤



$$\begin{array}{r} \underline{21} \text{ tens} \quad \underline{8} \text{ ones} \\ = \underline{29} \text{ cubes} \end{array}$$

⑥



$$\begin{array}{r} \underline{8} \text{ tens} \quad \underline{7} \text{ ones} \\ = \underline{15} \text{ cubes} \end{array}$$