

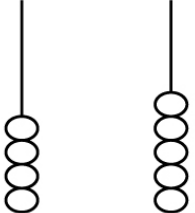
Name : _____



Place Values Worksheet



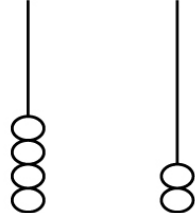
1



Tens Ones

How many? _____

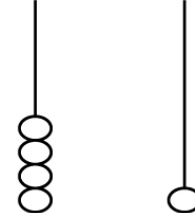
2



Tens Ones

How many? _____

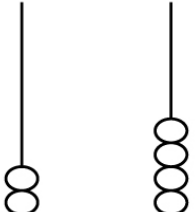
3



Tens Ones

How many? _____

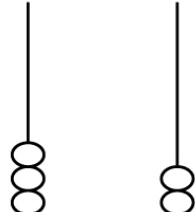
4



Tens Ones

How many? _____

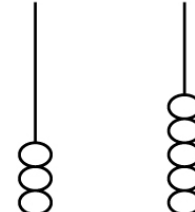
5



Tens Ones

How many? _____

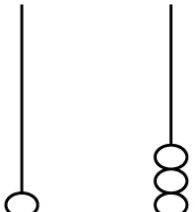
6



Tens Ones

How many? _____

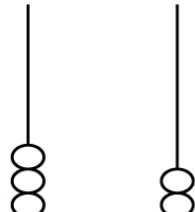
7



Tens Ones

How many? _____

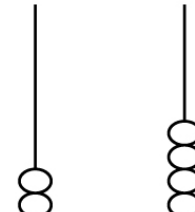
8



Tens Ones

How many? _____

9




Tens Ones

How many? _____

Name : _____



Place Values Worksheet



Answers

1

Tens	Ones
<u>4</u>	<u>5</u>

How many? 45

2

Tens	Ones
<u>4</u>	<u>2</u>

How many? 42

3

Tens	Ones
<u>4</u>	<u>1</u>

How many? 41

4

Tens	Ones
<u>2</u>	<u>4</u>

How many? 24

5

Tens	Ones
<u>3</u>	<u>2</u>

How many? 32

6

Tens	Ones
<u>3</u>	<u>5</u>

How many? 35

7

Tens	Ones
<u>1</u>	<u>3</u>

How many? 13

8

Tens	Ones
<u>3</u>	<u>2</u>

How many? 32

9

Tens	Ones
<u>2</u>	<u>4</u>

How many? 24