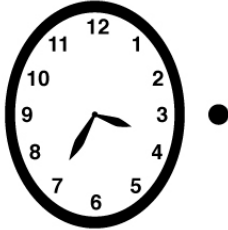


Name : _____

Time-Practice Worksheet

Draw lines to match the correct time with each clock.

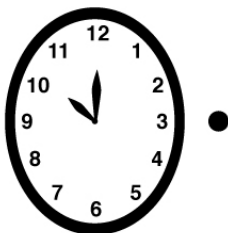
1



a

7 : 45

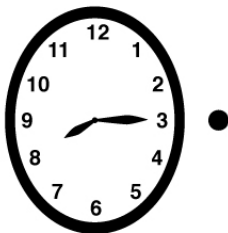
2



b

7 : 25

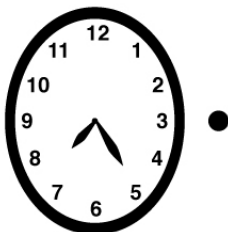
3



c

3 : 35

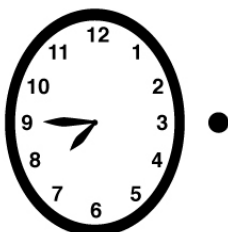
4



d

2 : 20

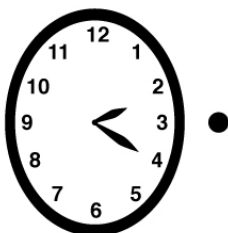
5



e

8 : 15

6



f

10 : 00

Name : _____

Time-Practice Worksheet

Answers

1



a

7 : 45

2



b

7 : 25

3



c

3 : 35

4



d

2 : 20

5



e

8 : 15

6



f

10 : 00

