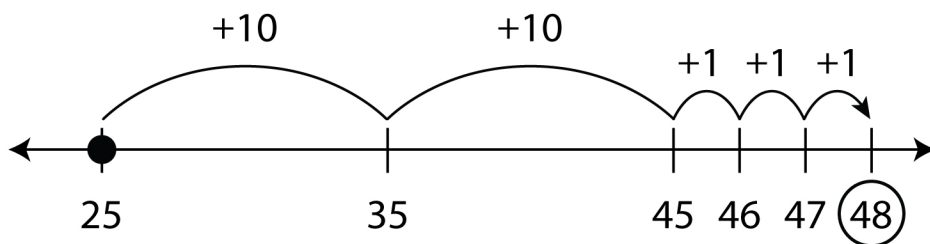



Adding on an Open Number Line

Use the open number lines below to find the sum of each addition problem.


1. $25 + 23 = \underline{48}$




2. $52 + 36 = \underline{\quad}$




3. $43 + 28 = \underline{\quad}$




4. $79 + 15 = \underline{\quad}$




5. $64 + 33 = \underline{\quad}$



6. $87 + 11 = \underline{\quad}$



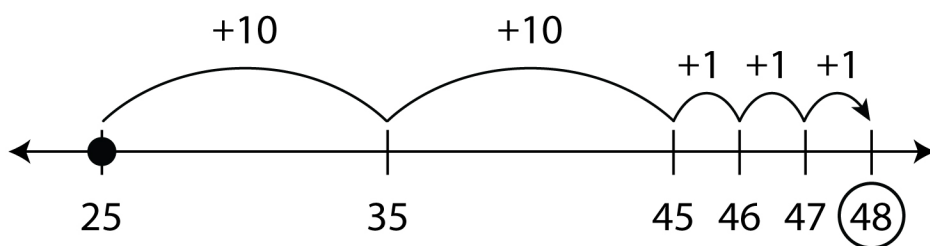
7. $58 + 24 = \underline{\quad}$



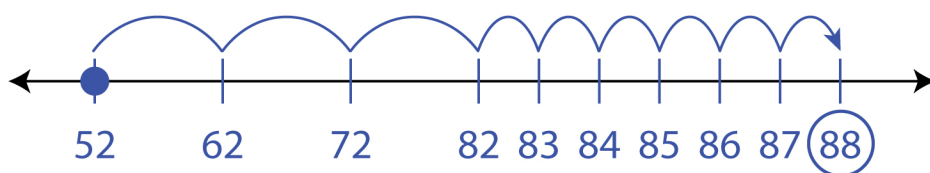
Adding on an Open Number Line

Answers

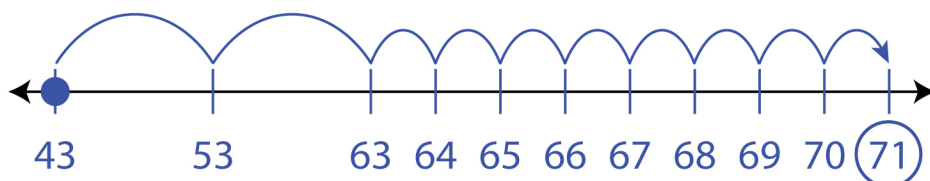
1. $25 + 23 = \underline{48}$



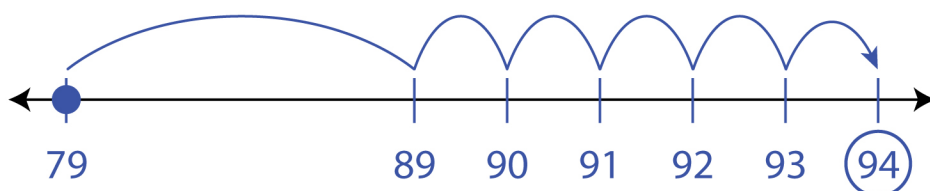
2. $52 + 36 = \underline{88}$



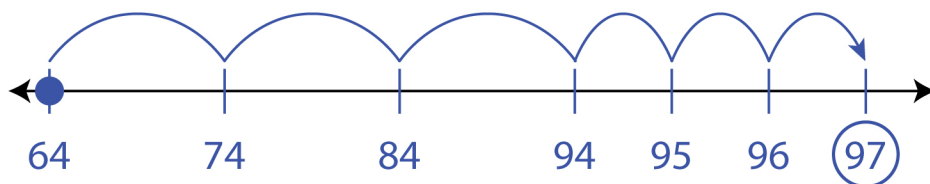
3. $43 + 28 = \underline{71}$



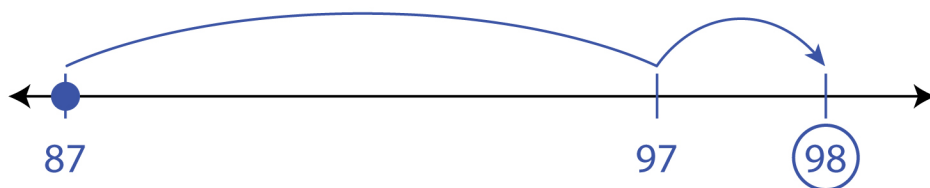
4. $79 + 15 = \underline{94}$



5. $64 + 33 = \underline{97}$



6. $87 + 11 = \underline{98}$



7. $58 + 24 = \underline{82}$

