

Name : _____

What is the Time?


For each clock, you need to either draw the hands or write the time. The first one is done for you.

1

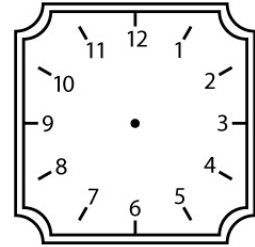


3 : 40

2



3



10 : 40


4




5



6




7




8 : 10

8



11 : 25

9



7 : 15

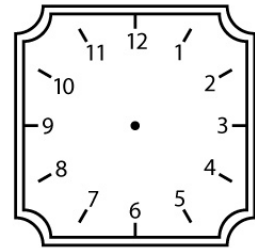
10



11



12



1 : 40

Name : _____

What is the Time? Answers

For each clock, you need to either draw the hands or write the time. The first one is done for you.

1




3 : 40

2



11 : 10

3



10 : 40

4




9 : 10

5



2 : 25

6



12 : 10

7




8 : 10

8



11 : 25

9



7 : 15

10




2 : 45

11



9 : 00

12



1 : 40