


Name : \_\_\_\_\_



# Writing Time


Write the time shown on the clock.

1




\_\_\_\_\_ : \_\_\_\_\_

2




\_\_\_\_\_ : \_\_\_\_\_

3




\_\_\_\_\_ : \_\_\_\_\_

4




\_\_\_\_\_ : \_\_\_\_\_

5




\_\_\_\_\_ : \_\_\_\_\_

6




\_\_\_\_\_ : \_\_\_\_\_

7



\_\_\_\_\_ : \_\_\_\_\_

8



\_\_\_\_\_ : \_\_\_\_\_


Name : \_\_\_\_\_



# Writing Time


## Answers

1




12:40

2




7:20

3




5:00

4




9:10

5




2:25

6




9:30

7



1:40

8



7:30