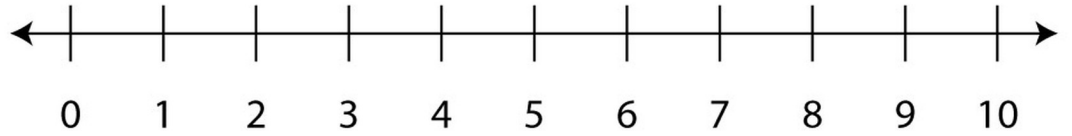
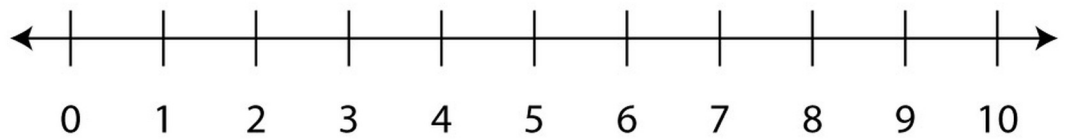


Addition Using Number Line Worksheet

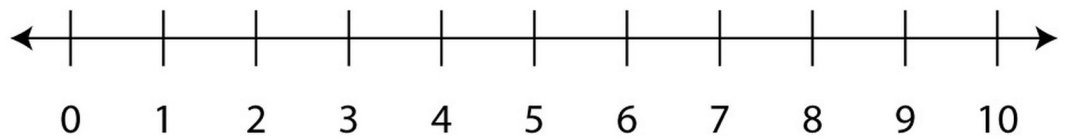
$$\begin{array}{r} 7 \\ + 2 \\ \hline \\ \hline \end{array}$$



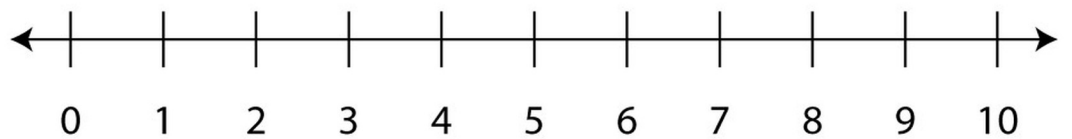
$$\begin{array}{r} 3 \\ + 6 \\ \hline \\ \hline \end{array}$$



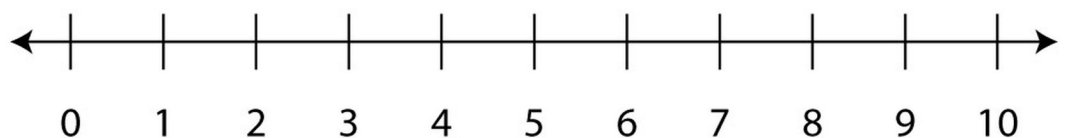
$$\begin{array}{r} 5 \\ + 3 \\ \hline \\ \hline \end{array}$$



$$\begin{array}{r} 1 \\ + 4 \\ \hline \\ \hline \end{array}$$



$$\begin{array}{r} 4 \\ + 4 \\ \hline \\ \hline \end{array}$$



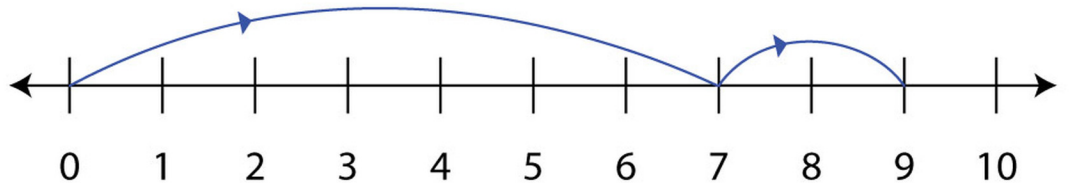
$$\begin{array}{r} 2 \\ + 2 \\ \hline \\ \hline \end{array}$$



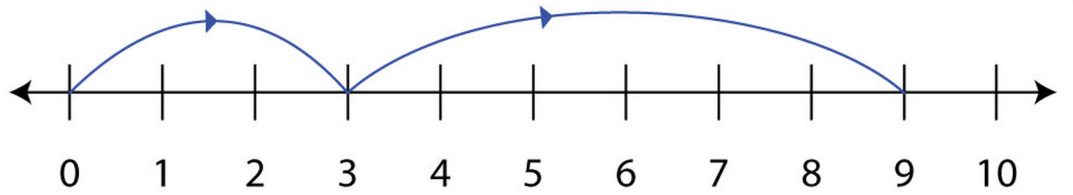
Addition Using Number Line Worksheet

Answers

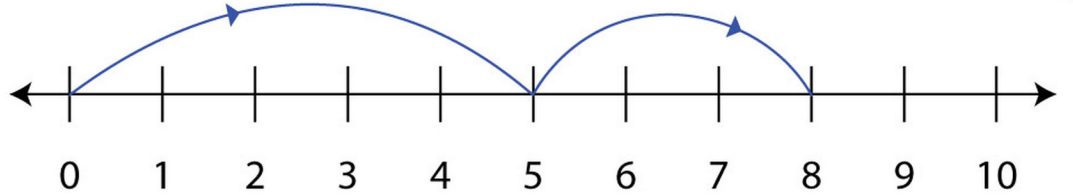
$$\begin{array}{r} 7 \\ + 2 \\ \hline 9 \end{array}$$



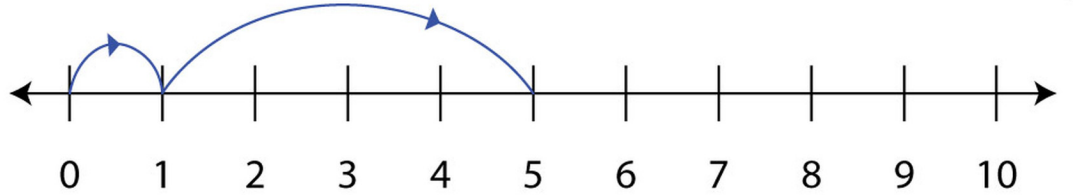
$$\begin{array}{r} 3 \\ + 6 \\ \hline 9 \end{array}$$



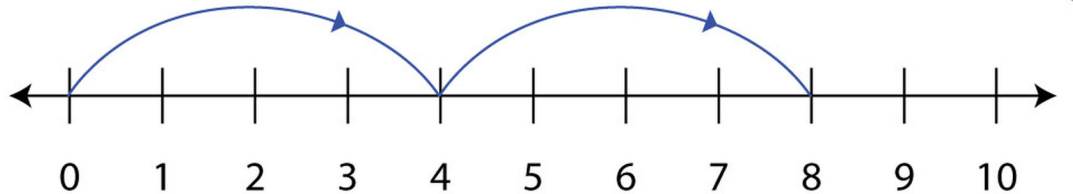
$$\begin{array}{r} 5 \\ + 3 \\ \hline 8 \end{array}$$



$$\begin{array}{r} 1 \\ + 4 \\ \hline 5 \end{array}$$



$$\begin{array}{r} 4 \\ + 4 \\ \hline 8 \end{array}$$



$$\begin{array}{r} 2 \\ + 2 \\ \hline 4 \end{array}$$

