


Name : _____

Score : _____ Date : _____

Time Worksheet


Choose the correct time the clock is showing and write below.

1




- 3 : 25
- 3 : 30
- 3 : 35
- 2 : 35

2




- 12 : 15
- 12 : 25
- 12 : 35
- 12 : 55

3




- 10 : 35
- 10 : 30
- 10 : 45
- 11 : 35

4




- 6 : 10
- 6 : 25
- 6 : 30
- 6 : 45

5



- 7 : 10
- 7 : 15
- 7 : 30
- 7 : 00

6



- 2 : 30
- 6 : 30
- 12 : 30
- 1 : 00


Name : _____

Score : _____ Date : _____

Time Worksheet

Answers


1



3 : 25
3 : 30
3 : 35
2 : 35

3 : 25


2



12 : 15
12 : 25
12 : 35
12 : 55

12 : 35


3



10 : 35
10 : 30
10 : 45
11 : 35

11 : 35


4



6 : 10
6 : 25
6 : 30
6 : 45

6 : 10


5



7 : 10
7 : 15
7 : 30
7 : 00

7 : 15

6



2 : 30
6 : 30
12 : 30
1 : 00

12 : 30