









Name :

Score :

Learning to Tell Time









<p>1</p>  <p>Clock A</p>	 <p>Clock B</p>	<p>a What is the time on clock A? _____</p> <p>b What is the time on clock B? _____</p> <p>c How much time has elapsed between them? _____</p>
<p>2</p>  <p>Clock A</p>	 <p>Clock B</p>	<p>a What is the time on clock A? _____</p> <p>b What is the time on clock B? _____</p> <p>c How much time has elapsed between them? _____</p>
<p>3</p>  <p>Clock A</p>	 <p>Clock B</p>	<p>a What is the time on clock A? _____</p> <p>b What is the time on clock B? _____</p> <p>c How much time has elapsed between them? _____</p>
<p>4</p>  <p>Clock A</p>	 <p>Clock B</p>	<p>a What is the time on clock A? _____</p> <p>b What is the time on clock B? _____</p> <p>c How much time has elapsed between them? _____</p>

Name :

Score :

Learning to Tell Time

Answers

<p>1</p>  <p>Clock A</p>	 <p>Clock B</p>	<p>a What is the time on clock A? <u>2:20</u></p> <p>b What is the time on clock B? <u>8:15</u></p> <p>c How much time has elapsed between them? <u>5 hours 55 minutes</u></p>
<p>2</p>  <p>Clock A</p>	 <p>Clock B</p>	<p>a What is the time on clock A? <u>6:10</u></p> <p>b What is the time on clock B? <u>2:55</u></p> <p>c How much time has elapsed between them? <u>8 hours 45 minutes</u></p>
<p>3</p>  <p>Clock A</p>	 <p>Clock B</p>	<p>a What is the time on clock A? <u>10:15</u></p> <p>b What is the time on clock B? <u>3:00</u></p> <p>c How much time has elapsed between them? <u>4 hours 45 minutes</u></p>
<p>4</p>  <p>Clock A</p>	 <p>Clock B</p>	<p>a What is the time on clock A? <u>8:15</u></p> <p>b What is the time on clock B? <u>12:15</u></p> <p>c How much time has elapsed between them? <u>4 hours</u></p>