





Multiplication with Pictures

Count the objects and then multiply.


Solved Example:




$$\boxed{4} \times \boxed{6} = \underline{24}$$



$$\boxed{} \times \boxed{} = \underline{}$$



$$\boxed{} \times \boxed{} = \underline{}$$





$$\boxed{} \times \boxed{} = \underline{}$$



Multiplication with Pictures

Answers


Solved Example:



$$4 \times 6 = 24$$



$$6 \times 8 = 48$$



$$7 \times 8 = 56$$



$$9 \times 7 = 63$$