


Name : _____

Score : _____ Date : _____

Telling Time

What time does the clock show? Choose the correct option and write below.

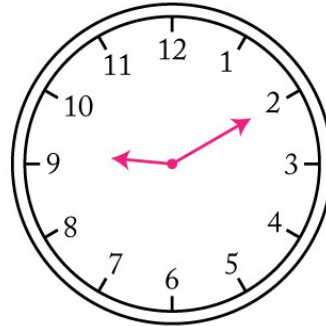
1



- 6 : 30
- 6 : 00
- 8 : 00
- 12 : 30

Time: _____


2



- 10 : 30
- 9 : 30
- 9 : 10
- 2 : 45

Time: _____

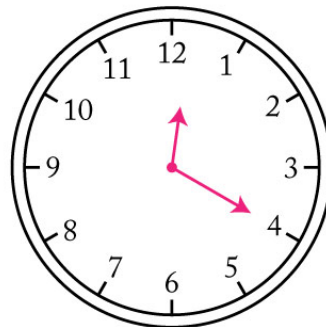
3



- 12 : 30
- 11 : 10
- 11 : 00
- 12 : 10

Time: _____

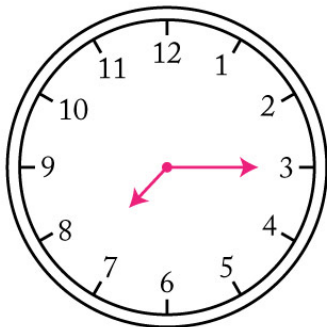
4



- 12 : 20
- 12 : 15
- 12 : 30
- 4 : 15

Time: _____

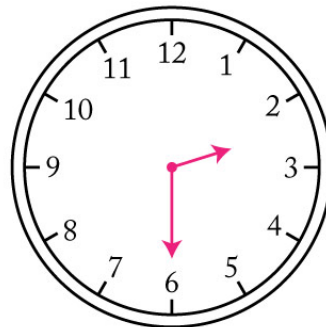
5



- 7 : 00
- 7 : 15
- 7 : 30
- 7 : 45

Time: _____

6



- 4 : 00
- 2 : 30
- 3 : 00
- 2 : 30

Time: _____


Name : _____

Score : _____ Date : _____

Telling Time

Answers

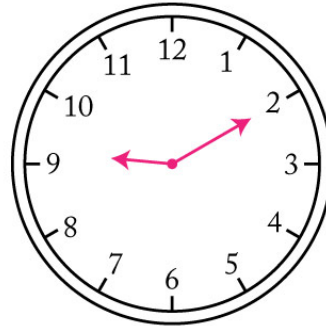
1



6 : 30
6 : 00
8 : 00
12 : 30

Time: 6 : 00


2



10 : 30
9 : 30
9 : 10
2 : 45

Time: 9 : 10

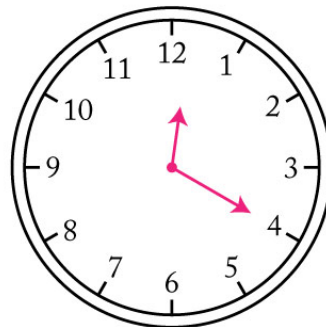
3



12 : 30
11 : 10
11 : 00
12 : 10

Time: 11 : 10

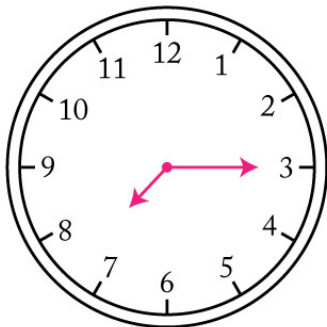
4



12 : 20
12 : 15
12 : 30
4 : 15

Time: 12 : 20

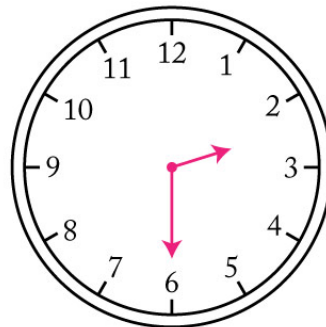
5



7 : 00
7 : 15
7 : 30
7 : 45

Time: 7 : 15

6



4 : 00
2 : 30
3 : 00
2 : 30

Time: 2 : 30