

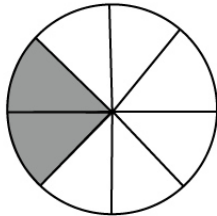
Name : _____

Score : _____ Date : _____

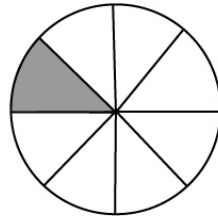
Easy Fractions

Write your answers. Shade the shape in your answer.

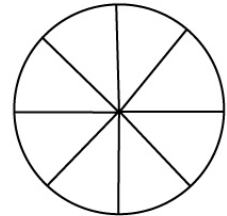
1



+



=

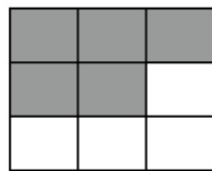


$$\frac{2}{8}$$


+

$$\frac{1}{8}$$

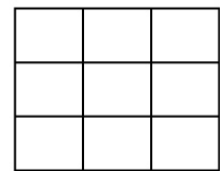
2



+



=

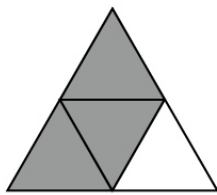


$$\frac{5}{9}$$

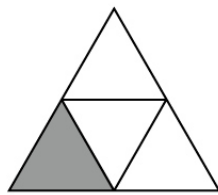
+

$$\frac{2}{9}$$

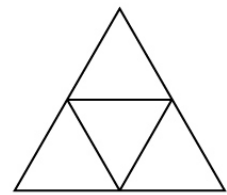
3



+



=

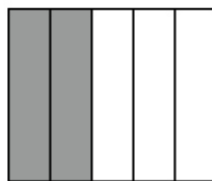


$$\frac{3}{4}$$

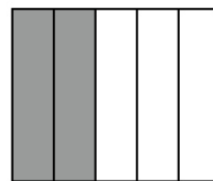
+

$$\frac{1}{4}$$

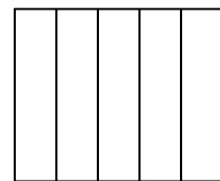
4



+



=



$$\frac{2}{5}$$

+

$$\frac{2}{5}$$

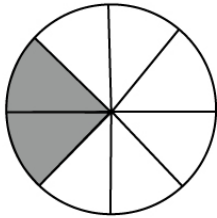
Name : _____

Score : _____ Date : _____

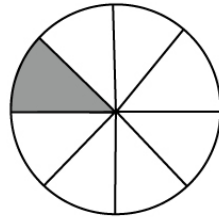
Easy Fractions

Answers.

1



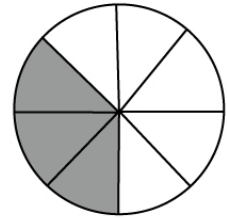
+



+

$\frac{1}{8}$

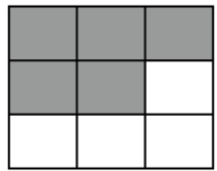
=



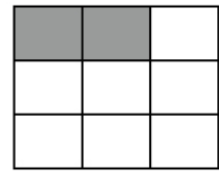
$\frac{2}{8}$

$\frac{3}{8}$

2



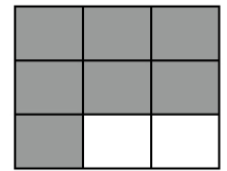
+



+

$\frac{2}{9}$

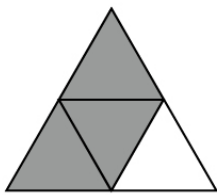
=



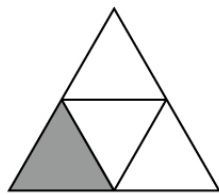
$\frac{5}{9}$

$\frac{7}{9}$

3



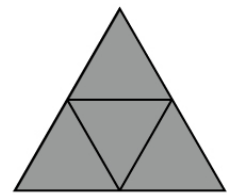
+



+

$\frac{1}{4}$

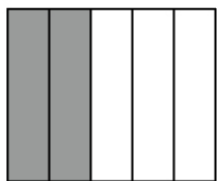
=



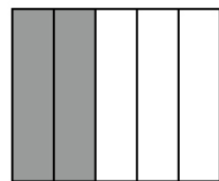
$\frac{3}{4}$

1

4



+



+

$\frac{2}{5}$

=



$\frac{2}{5}$

$\frac{4}{5}$