

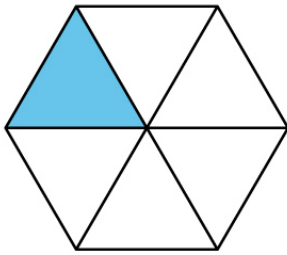
Name : _____

Score : _____

Working with Fractions

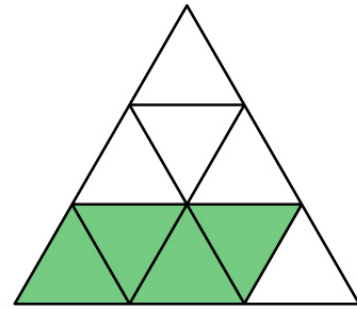
What fraction does the colored part show in each figure?

Example:



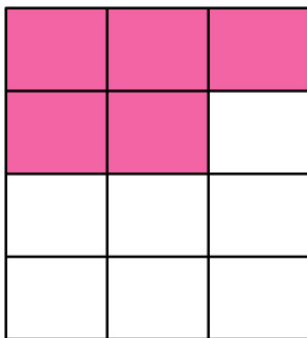
$$= \frac{1}{6}$$

①



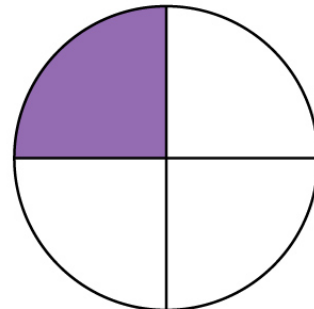
=

②



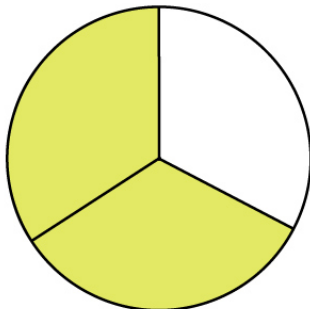
=

③



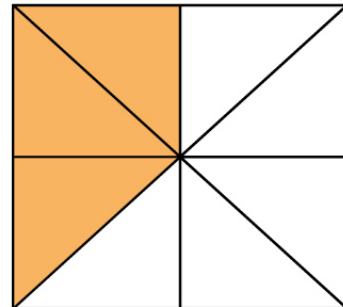
=

④



=

⑤



=

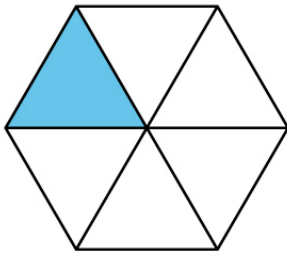
Name : _____

Score : _____

Working with Fractions

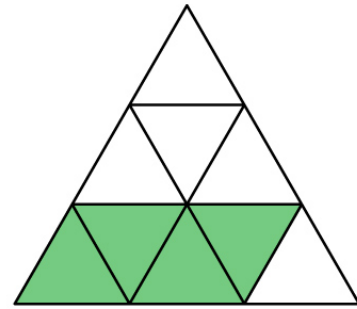
Answers.

Example:




$$= \frac{1}{6}$$

①



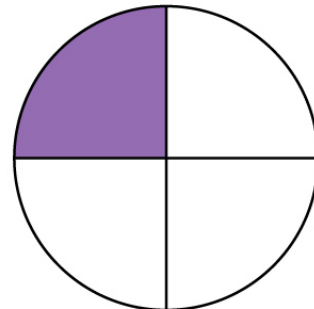
$$= \frac{4}{9}$$

②



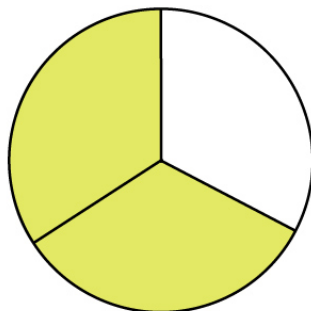
$$= \frac{5}{12}$$

③



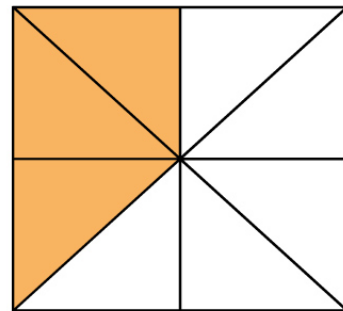
$$= \frac{1}{4}$$

④



$$= \frac{2}{3}$$

⑤



$$= \frac{3}{8}$$