


Name : \_\_\_\_\_

Score : \_\_\_\_\_ Date : \_\_\_\_\_

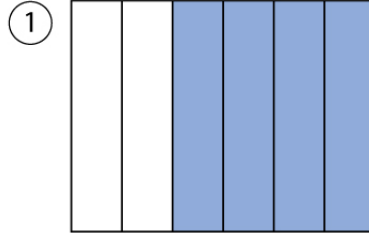
# Easy Fractions

Express in fraction what part of each figure is shaded.


Example:



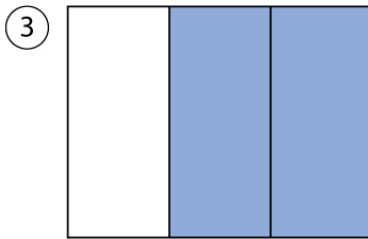
$$= \frac{3}{5}$$




=



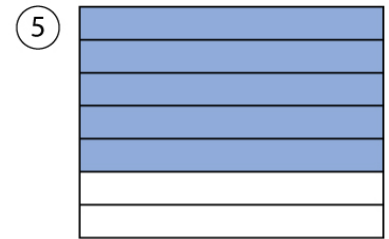
=



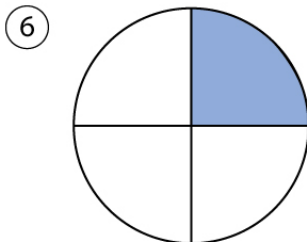
=



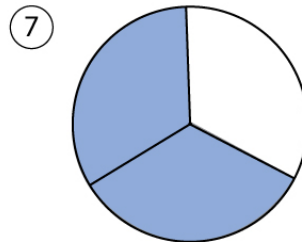
=



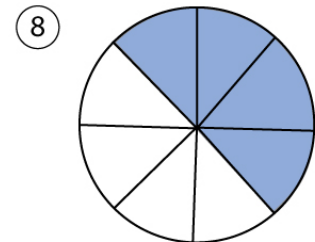
=



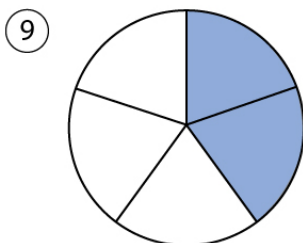
=



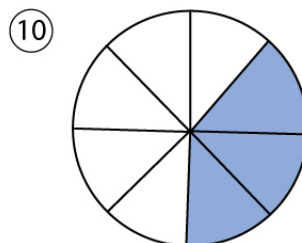
=



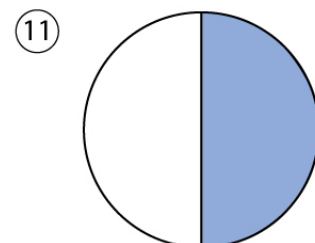
=



=



=



=


Name : .....

Score : ..... Date : .....

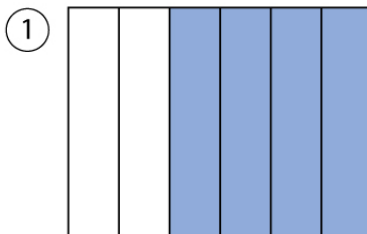
# Easy Fractions

## Answers.


Example:




$$= \frac{3}{5}$$




$$= \frac{4}{6} = \frac{2}{3}$$




$$= \frac{1}{2}$$



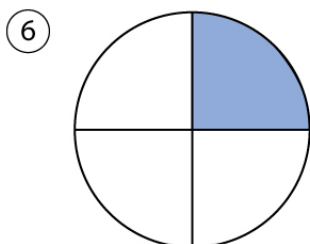
$$= \frac{2}{3}$$



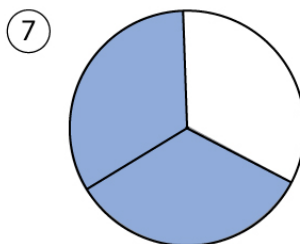
$$= \frac{2}{2} = 1$$



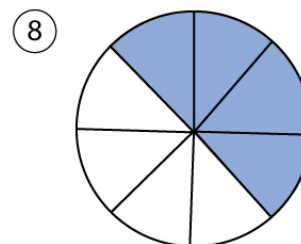
$$= \frac{5}{7}$$



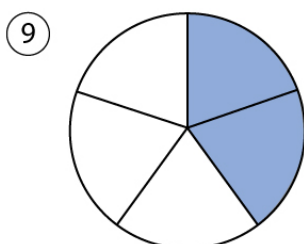
$$= \frac{1}{4}$$



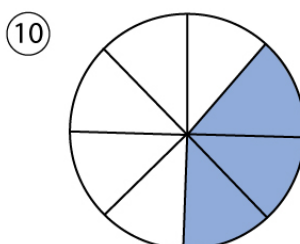
$$= \frac{2}{3}$$



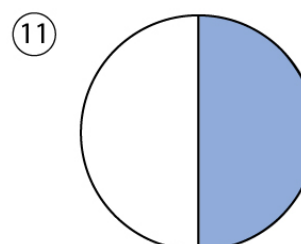
$$= \frac{4}{8} = \frac{1}{2}$$



$$= \frac{2}{5}$$



$$= \frac{3}{8}$$



$$= \frac{1}{2}$$